

Do as directed:**1. Underline the helping verb and circle the main verb.**

- a) Uncle and aunt will arrive tomorrow.
b) Sam is waiting for the bus.

2. Punctuate the given sentences and write its kinds.

- a) What is your name _____
b) Gopal helped the beggar _____

3. Complete the table:

good	_____	_____
large	_____	_____

4. Complete the given sentences with suitable 'Wh' question words.

- a) _____ will the game start?
b) _____ do you live?
c) _____ is your class teacher?

5) Write the past tense of:

- a) eat –
b) come –
c) call –

6. Fill in the blanks with suitable verbs given in the brackets.

- a) The sun _____ in the east. (rise/rises)
b) Soldiers _____ in wars. (fight/ fights)

7. Fill in the blanks with the correct form of the adjectives given in the brackets.

- a) Seema is _____ than Ria. (clever)
b) A feather is very _____. (light)
c) The tortoise is the _____ animal. (slow)

8. Look at the pictures and fill up the most suitable prepositions given in the brackets.

- a) The lemon is ___ the jug. (in/on)



- b) The cat is hiding _____ the sofa. (behind/ on)



9. **Form adverbs of manner by adding -ly to the following words.**

a) happy + -ly = _____

b) easy + -ly = _____

c) loud + -ly = _____

10. **Read the clues and fill up with correct homophones.**

a) a story _____ (tail/ tale)

b) a period of seven days _____ (weak /week)

NOTE : Write and learn the given assignment.

विशेष कार्य – ३५

पुनरावृत्ति कार्य

कक्षा : 3

विषय : हिंदी

दिनांक : १५ .०२ .२१

पुनरावृत्ति (दिए गए सारे कार्य कॉपी में करें)

प्र० क) खाली स्थानों को भरो।

- १) नहीं – नहीं ! यह मेरी ----- है।
- २) पानी कितना कीमती और ----- है।
- ३) हमें पानी का ----- करना चाहिए।
- ४) ----- को खेती करने के लिए पानी नहीं मिलेगा।
- ५) हाँ, बेटा ! हमें इस तरह अनेक ----- करने होंगे।
- ६) लहलहाती फसल को देख कर ----- झूम उठते हैं।
- ७) समय रहते इस ----- स्थिति से बचा जा सकता है।
- ८) ----- का रंग कई बीमारियों से बचाता है।
- ९) बच्चे आने – जाने वालों पर ----- से भरे गुब्बारे फेंकते हैं।
- १०) यह एक ----- और ----- त्योहार मना जाता है।
- ११) यह त्योहार गर्मी और सर्दी की -----पर मनाया जाता है।

प्र०ख) दिए गए वाक्यों में से क्रिया शब्द छाँटो।

- १) सूरज उग रहा है। -----
- २) बच्चे तालाब में नहा रहे हैं। -----
- ३) राधा गीत गा रही है। -----

- ४) चंचल नाच रही है। -----
- ५) खरगोश गाजर खाता है। -----
- ६) रमन दूध पीता है। -----
- ७) नमन खेल रहा है। -----
- ८) माँ भोजन पका रही है। -----
- ९) सोहन अखबार पढ रहा है। -----
- १०) माँ बच्चे को सुला रही है। -----

प्र० ग) दिए गए शब्दों के अनेकार्थी शब्द लिखो ।

- १) पत्र - ----- , -----
- २) पर - ----- , -----
- ३) जल - ----- , -----
- ४) कनक - ----- , -----
- ५) हार - ----- , -----
- ६) बाल - ----- , -----
- ७) तीर - ----- , -----
- ८) उत्तर - ----- , -----
- ९) जलज - ----- , -----
- १०) सर - ----- , -----

प्र० घ) अनेक शब्दों के लिए एक शब्द लिखिए ।

- १) खेत में काम करने वाला -
- २) मूर्ति बनाने वाला -
- ३) सेना में काम करने वाला -
- ४) कविता लिखने वाली -
- ५) साथ पढने वाला -
- ६) जिसे किसी का डर ना हो -
- ७) प्रतिदिन होने वाला -
- ८) वर्ष में एक बार होने वाला -
- ९) जो मेहनत करता हो -
- १०) जहाँ इलाज किया जाता है -

Special Assignment

STD – 3

SUBJECT – MATHS

DATE : 15.02.21

REVISION OF LESSON 9 (MONEY) & LESSON 10 (TIME)

1. Write the following in figures.

a) Twenty- five rupees seventy five paise-

b) Ninety- nine rupees ninety paise-

2. Write in words.

a) ₹ 10.10

b) ₹ 25.65

c) ₹ 134. 40

a) 48 rupees into paise

b) 9085 paise into rupees

c) 125 rupees 40 paise into paise

5. Multiply the following.

a) ₹ 8.3 5

b) ₹ 15. 75

$\begin{array}{r} \times \quad 4 \\ \hline \end{array}$

$\begin{array}{r} \times \quad 9 \\ \hline \end{array}$

6. Divide the following.

a) 85 p by 5

b) ₹ 20.36 by 4

7. Solve the following.

a) Vishal purchased a notebook for ₹ 18.90 , a pencil for ₹ 4.50 and a scale for ₹ 13.75. How much money should he pay to the stationer?


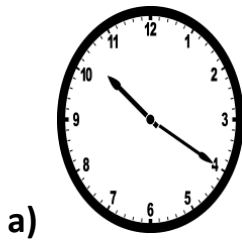
b) The total cost of 5 entry tickets to a Book Fair is ₹75.75. What is the cost of one entry ticket?

8. Write the time using a.m and p.m.



a) 4 o'clock in the morning

b) 9:30 at night

9. Look at the clock and write the time in three ways.



10. Draw the hands of the clock to show the correct time.



18 min. to 8

24 min. past 6

11. Tony studies from 3:30 p.m. to 5:30 p.m. How long does he study?

12. Fill in the blanks.

- a) There are _____ days in a leap year.
- b) October has _____ days.
- c) There are _____ weeks in a year.

13. Write these dates in short form.

- a) May 13, 2009
- b) August 14 , 2012

14. Learn and write the table of 16 to 20.

=====

Revision Exercise

Lesson- 7 11,12

A. Answer in one word.

1. Feathers that keep a bird warm.
2. A bird that builds its nest on the ground.
3. Plants breathe through tiny pores called
4. The breathing organ of fish. _____
5. The person who mends our shoes
6. The age of children below which they are prohibited to work.
7. The person who puts off fire.

B. Give two examples of each of the following.

1. Birds that cannot fly
2. Scratching birds
3. Living things
4. Birds that are excellent gliders
5. Natural non-living things
6. Domestic workers
7. Flesh eating birds
8. Birds having short, hard and pointed beak

C. Define the given terms.

1. Claw
2. Nest
3. Occupation
4. Stomata

D. Answer these questions.

1. Write any three characteristics of birds .

2. Where does a cuckoo keep its eggs?
3. How do plants breathe?
4. What is child labour?

E. Activity

1. Draw, colour and label two living things and two non-living things.
2. Draw, colour and name two means of communication.

-----x-----

A. Fill in the blanks

1. One can work with images text sound and video with _____ software.
2. _____ stands for central processing unit.
3. The control menu box is present in the _____ bar.
4. _____ button has two squares on it.
5. The _____ button is used to make text thicker.
6. Font group is present on the _____ tab.
7. The _____ option is always on by default in WordPad.
8. Press the _____ key to delete characters to the left of the insertion point.
9. _____ is used for hiding the turtle.
10. Reverse of HT command is _____.
11. The area where the turtle draws is called _____

B. Write true or false

1. ST command hides the turtle.
2. Home command clears recall list box.
3. Paste option can be found on editing group.
4. Replace option can be found in Home tab.
5. Maximize button has one square in it.
6. Ribbon contains tabs and groups.
7. WordPad is word processing software.
8. MS Paint is an example of system software.
9. Computer works on the IPO cycle.
10. The default font set in wordpad is Arial.

C. Give two examples of each

- 1. Input devices**
- 2. Output devices**
- 3. Types of software**
- 4. Basic logo commands**
- 5. Pen commands**

Note: Write in computer notebook and learn.

ANSWER KEY

- | | |
|------------------------------------|-------------------|
| A.1. multimedia. | B.1. False |
| 2. <u>CPU</u> | 2. False |
| 3. <u>title</u> | 3. False |
| 4. <u>Restore</u> | 4. True |
| 5. <u>bold</u> | 5. True |
| 6. <u>Home</u> | 6. True |
| 7. <u>insert.</u> | 7. True |
| 8. <u>backspace</u> | 8. False |
| 9. <u>HT</u> | 9. True |
| 10. <u>ST.</u> | 10. False |
| 11. <u>graphics screen.</u> | |

- C.1. Keyboard , Mouse**
- 2. Printer, Monitor**
- 3. System software, Application software**
- 4. FD (Forward) BK (backward)**
- 5. PU (Pen up) PD (pen down)**