

1. Answer the following questions.

- a) What could Kaku not believe?
- b) What did the chameleon want to show the golden bird?
- c) How did Jiya make a snowman?
- d) Where is the baby windhover?
- e) What did Kaku love the most about Lal Hawa?

2. Write the meaning of the following words.

- a) fine =
- b) slid =
- c) approaching =
- d) pale =
- e) strange =
- f) several=
- g) cables =

3. Make sentences with the given words.

- a) shelter–
- b) courage –
- c) squeak –
- d) lonely–
- e) muttered –
- f) fluffy –

4. Do as directed:

a) Complete the sentences with the correct collective nouns given in the bracket.

- i.) From the boat, we saw a _____of fish moving in one direction. (army /school)
- ii) There was a _____of ants near the park gate.(swarm/ flock)

b) Synonym of 'good' and 'quick' are _____and _____.

c) Fill the blanks with the correct form of the verbs given in the brackets.

- i) They _____ to have some snacks with tea. (like)
- ii) Amit _____ animals.(love)

d) Write the correct pronouns in the blanks to replace the underlined nouns.

i) Seema and Asha like to play volleyball.

_____ like to play volleyball.

ii) The ball was big.

_____ was big.

e) Fill in the blanks with a, an or the.

i) Raja eats _____ egg every day.

ii) _____ capital of India is New Delhi.

iii) This is _____ cupboard.

f) Join the following two sentences by using the conjunction 'and'.

i) Ann has a book. Ann has a notebook.

ii) Ruhi ate an apple. Ruhi ate a banana.

g) Use 'but' to join the following sentences.

i) May is hot. December is cold.

ii) Shalu likes mangoes. She does not like peaches.

h) Pick out adjectives from the given sentences.

i) I saw some white clouds.

ii) Yesterday was a hot day.

iii) Ants are small insects.

i) Fill in the blanks using the correct prepositions given in the brackets.

i) The girl is sitting _____ the tree. (under/in)

ii) What do you do _____ the evening ? (in/ to)

j) Complete the table.

Positive	Comparative	Superlative
good	_____	best
happy	happier	_____
_____	shorter	shortest

k) Choose the correct possessive pronouns from the brackets to complete the sentences.

i) This is my book. This book is _____.(mine/ yours)

ii) This is her bicycle. That bicycle is _____.(hers/ours)

L) Pick out the words that have similar meanings from the following sentences.

- i) The empty boxes were lying outside a bare room.
- ii) The cakes are tasty but the tarts are more delicious.

XXXXXX

गुरु गोबिंद सिंह पब्लिक स्कूल
विशेष कार्य – १४ (२०२१-२२)

पुनरावृत्ति

कक्षा – तीसरी

विषय – हिंदी

दिनांक. ३१ .०८. २०२१

प्रश्न १. निम्नलिखित प्रश्नों के उत्तर लिखो ।

- क. उपवन की शोभा किससे है ?
- ख. रूपा किस प्रकार की लडकी थी ?
- ग. किस मुगल बादशाह को बाग लगवाने का शौक था ?
- घ. पत्र में किस समस्या को उठाया गया है ?
- ड. सुख – दुख किसके समान है ?
- च. वृद्ध व्यक्ति क्या लेने आया था ?
- छ. बादल कहाँ अधिक जल बरसा पाते हैं ?
- ज. बाबा आमटे के आश्रम का नाम क्या है ?
- झ. कलंगी क्यों उदास हो गई ?
- ञ. हमें सुख का संसार कहाँ बसाना चाहिए ?

प्रश्न ३. शब्दों के अर्थ लिखो ।

- | | |
|-------------|-----------|
| क. व्यवस्था | ख. तीर |
| ग. निर्धन | घ. उम्मीद |
| ड. मादक | |

प्रश्न ४. खाली स्थान भरो ।

- क. रूपा ने अपने थैले से ----- निकाला ।
- ख. शालीमार बाग ----- है ।
- ग. मनुष्य को ----- का पालन करना चाहिए ।
- घ. अलादीन ----- भीतर चला गया ।
- ड . अब कलंगी ----- थी ।

प्रश्न ५. बताओ , किसने किससे कहा ?

क. " आज तुम न होती तो मैं अपने प्राणों से हाथ धो बैठती । "

ख. " पुराने दीपक के बदले नया दीपक ले लो । "

ग. " जाता हूँ , मगर फिर आऊँगा । बकरे की माँ कब तक खैर मनाएगी । "

घ. " तुमने मेरा सारा पाउडर बिखेर दिया । "

व्याकरण

प्रश्न ६. निर्देशानुसार कार्य करो ।

1. सही (✓) अथवा गलत (×) का चिह्न लगाओ ।

क. भाषण देना मौखिक भाषा का रूप है ।

ख. लिखित भाषा को सुनकर समझा जाता है ।

2. दिए गए संयुक्ताक्षरों से दो – दो शब्द बनाओ ।

क. क्क ख. ल्ल

3. सार्थक शब्द बनाओ ।

1. व उ प न

2. हा ङ प

4. दिए गए वाक्य में रंगीन शब्द क्या हैं – स्थान , भाव ?

क. ताजमहल की सुंदरता देखते बनती है ।

ख. माली बगीचे में है ।

5. लिंग बदलो ।

क. अध्यापक ख. हाथी

6. वचन बदलो ।

क. चिड़िया ख. दवाई

7. इन वाक्यों में से सर्वनाम शब्द छाँटकर लिखो ।

क. हम कल दिल्ली जाएँगे ।

ख. उन्होंने खाना खा लिया है ।

8. विशेषण शब्दों पर गोला ○ लगाओ ।

क. उसके कई दोस्त आए हैं ।

ख. मेरी पेंसिल लाल रंग की है ।

9. उचित क्रिया शब्दों से वाक्य पूरा करो ।

क. सोहन अखबार पढ़ ————— है । (रहा / रही)

ख. रमन दूध ————— है । (पीती / पीता)

गृह —कार्य

1. पढ़ाए गए पाठों के अभ्यासों का पुनः अभ्यास करो ।
 2. निबंध (लेख)याद करो । (मेरा विद्यालय, रक्षाबंधन, स्वतंत्रता दिवस , ग्रीष्म ऋतु, वर्षा ऋतु)
-

Revision Assignment

Sub:Maths.

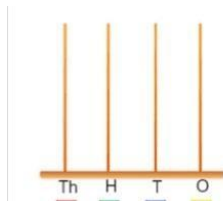
Std:3

Date:31.08.2021

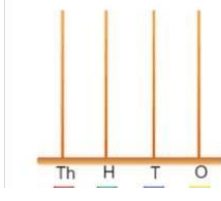
Note: The given assignment should be completed in Maths notebook.

1. **Represent each number on an Abacus and write number name.**

A. 3461.

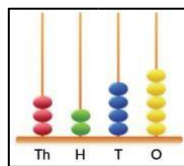


B. 3456

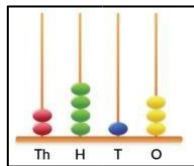


2. **Write the correct number and number name.**

A.



B.



3. **Write the successor of the given numbers.**

A. 8900

B. 3423

C. 4000

4. **Write the predecessor of the given numbers.**

A. 3000

B. 4734

C. 7799

5. **Write the following numbers in ascending and descending orders.**

4568, 3456, 4567, 9864

Ascending order:_____

Descending order: _____

6. Form the greatest and the smallest 4 digit numbers using the digits 3,5,1 and 4

Greatest number-

Smallest number-

7. Write the Roman numerals for

A. 39 B. 29 C. 19 D. 35 E. 23

8. Write the Hindu Arabic numerals

A. XXXVI =

B. XXIX =

C. XV =

D. XIII =

9. Find out whether the sum is an odd or an even number.

A. $123 + 31 = \underline{\quad}, \underline{\quad}$

B. $451 + 25 = \underline{\quad}, \underline{\quad}$

C. $323 + 94 = \underline{\quad}, \underline{\quad}$

10. Write the given numbers in the expanded form.

A. 4512 -

B. 8542 -

C. 6209 -

11. Write the place value and face value of each underlined digit.

	<u>Place value</u>	<u>Face value</u>
A. <u>6</u> 125 -	<u> </u>	<u> </u>
B. 56 <u>8</u> 9 -	<u> </u>	<u> </u>

12. Complete the following pattern using the skip counting.

A. 3125, 3130, ,

B. 4226, 4326, ,

C. 8888, 9888, ,

13. Fill in the blanks.

A. $5000 + 500 + 50 = \text{---}$

B. $237 + 723 = 723 + \text{---} = \text{----}$

C. $8999 + 1000 = \text{-----}$

14. Solve the following

- A. $3886 + 4445 =$
- B. $2189 + 4567 =$
- C. $₹367.89 + ₹563.11 =$
- D. $7635 - 3439 =$
- E. $₹769.89 - ₹563.11 =$
- F. $4262 - 2522 + 1889 - 222 =$
- G. $812 \times 8 =$
- H. $265 \times 13 =$
- I. $105 \times 25 =$

15. Write and learn the table of 11,12 and 13.

16. Solve word problems .

- A. Ram has ₹ 561.75. He spends ₹ 432.50 to purchase a book. How much money is left with him?
- B. In an Orchard, there are 4004 mango trees and 1089 orange trees. How many trees are there altogether in the orchard ?
- C. A bag contains 202 oranges. How many total number of oranges are there in 11 such bags filled with oranges ?
- D. In a library there are 3038 English books, 2237 Hindi books and 3566 Mathematics books. How many books in total are there in the library?
- E. There are 4454 students in a school. Out of them, 1220 are girls. How many boys are there in the school?
- F. How many trees are there in 104 rows, if there are 25 trees in each row?

Assignment – 14
Session – 2021- 22

REVISION

SUB:- EVS

STD- Three

Date : 30.08.2021

The given assignment should be completed in EVS notebook.

A. Answer in one word.

1. The tiny holes present in leaves through which a plant breathes- _____.
2. The part of the plant above the soil- _____.
3. Carnivores are also known as- _____.
4. An insect that eats mud with its hole-like mouth- _____.
5. The process by which green plants prepare their food- _____.

B. Give two examples for each of the following.

1. Fruits having many seeds- _____, _____
2. Edible roots- _____, _____
3. Plants showing movement- _____, _____
4. Natural non-living things- _____, _____
5. Types of plants- _____, _____

C. Fill in the blanks.

1. _____ is the most showy part of a plant.
2. Leaves are known as the _____ of the plant.
3. _____ eat the leftover food from other animal's hunt.
4. Human being is also an _____.
5. Living things need _____ to breathe.

D. Select the correct phrases from the box and name the given pictures.

Nectar sucking insect, Tap root, Fruit with one seed, Breathe through gills, Has woody trunk





_____.



_____.



_____.



_____.



_____.

E. Define the given terms.

1. Germination

2. Excretion

3. Natural things

F. Answer the given questions.

1. How do plants make their food?

2. Why are feeding habits of animals different?

3. Give reason:

Veins are very important parts of leaves.

4. What is food chain? Explain with the help of an example.



Activity

- 1) Draw a plant and label its parts.
- 2) Draw, colour and name (a) Two natural things (b) Two man- made things.

-----x-----



Assignment- 14 (Session -2021-22)
REVISION

Class -3
Subject – G.K

Date – 30.08.2021

A. Answer the following questions in one word.

1. Which sea animal comes to land to lay eggs?
2. Which is the world's largest animal?
3. Name the part of the plant which helps it to breathe.
4. Which organ in our body pumps blood?
5. Which is the largest internal organ in the human body?
6. What is the purpose of the shortcut Ctrl + s ?
7. Who invented the telephone?
8. Which is the smallest and closest planet to the Sun?
9. Who is the current President of India?
10. Who invented and built the world's first aeroplane?
11. Name the part of the flowering plant which helps it grow a new plant.
12. What is the name of the thick bone cage that protects our brain?
13. Which shortcut key is used to rename a file or folder?
14. The position of which star is used to find directions?
15. In which year was WhatsApp launched?
16. How many teeth does an adult have?
17. Name the vehicle which can travel over both land and water.
18. Name the leaf which is used as a cure for various skin diseases and helps in keeping pests and mosquitoes away.
19. Which animal is endangered because of its ivory tusks?
20. Name the part of the plant which contains its seeds.
21. Who invented steam engine?
22. Which part of our body has the maximum number of bones?
23. Name the first ever newspaper published in India.
24. Name the bright yellow precious metal which is used in making jewellery.
25. Which is the hardest natural substance found on earth?
26. What is the full form of DND?
27. Name the appliance which is used to make brown toast for breakfast.
28. Name the comic character who came from the planet Krypton.
29. Name the type of pollution caused by playing loudspeaker in high volume.
30. What is onomatopoeia?
31. Which comic book character is the king of seven seas?

B. Fill in the blanks

1. _____ invented the telephone in 1876.
2. Electrical wires are commonly made of _____.
3. _____ is the smallest and closest planet to the sun.
4. _____ sources of energy are those which are replenished naturally.
5. Millions of stars together form a _____.

C. Identify these comic book characters from their dialogues given below.
Find their names and write them in the given space.

1. The angrier I am , the mightier I become, and then I can smash anything into pieces. Who am I?

2. Before joining hands with S.H.I.E.L.D, I was Soviet agent. Who am I?

3. I have metal in my claws and can heal myself quickly. Who am I?

4. I am a warrior princess, and I possess bracelets that give me superhuman strength. Who am I?

5. I am from the planet Krypton. Who am I?

6. I am a patriotic soldier with a stars and stripes shield .Who am I?

7. I am the owner of Stark Industries. Who am I?

8. I am the king of seven seas .Who am I?

Note : Students are instructed to learn and practise the given assignment in their rough notebook.

ASSIGNMENT – 14

SESSION – 2021 – 22

REVISION

STD:- 3

SUB:- Moral Science

Date :30.08.2021

A. Learn the answers of the given questions:

1. Who is present everywhere ?
2. What do trees provide us?
3. How are trees useful to birds and trees?
4. Where was the Guru's ashram?
5. Who attacked the caravan on the way?
6. How many gold coins the boy had?
7. Who taught the boy to hide the coins?
8. Who attacked the caravan?
9. What lessons did Mahatma Gandhi teach us?
10. Why did the Guru ask his students to bring money from his home ?
11. How did Guruji teach his students ?
12. Where was caravan moving?
13. What did the travellers had with them?
14. " This swan is mine" . Who is the speaker?
15. Who removed the arrow from the swan's body?
16. Who wanted to put put the pictures of the three monkeys at her house?
17. What should we do if we do something wrong?
18. What do trees provide us?
19. Do you know Mahatma Gandhi? What was his full name?
20. Who is called the 'Father of the Nation' ?

B. Say 'True' or 'False':-

- a. **Three monkeys were very dear to Gandhiji.**
- b. **Mahatma Gandhi is called the 'Father of the Nation'.**



- c. We should not follow the path of truthfulness and goodness.
- d. The boy hid the coins in his jacket.

C. Fill in the blanks:-

- a. The caravan was moving towards _____.
 - b. The boy was not _____ of the robbers at all.
 - c. All the people have been created by the same _____.
 - d. The _____ monkey has covered his ears with his hands.
-



REVISION ASSIGNMENT

CLASS: 3

SUBJECT: COMPUTER

DATE : 31/08/21

A . Fill in the blanks.

- The _____ has commands that help us to draw.
- _____ software controls the working of a computer.
- A monitor is also called _____.
- To draw a square using rectangle tool press the _____ key.
- _____ button is the most important button.
- We can make only _____ arcs in a curve.
- The first Windows operating system was launched in _____.

B. Write T for true and F for false statements.

- Loading the operating system is called booting.
- There are three types of star shapes in MS paint.
- Windows 7 was launched in 2000.
- Microphone is an output device.
- An operating system of a computer manages the hardware and the software.
- We use speakers and headphones to hear sounds and music.
- Curve shape is used to draw straight line.

C. Write full form of the following

- CRT - _____
- LCD - _____
- DOS - _____
- ALU- _____
- CD - _____
- DVD - _____

D. Name these tools.

i)



ii)



iii)



iv)



v)



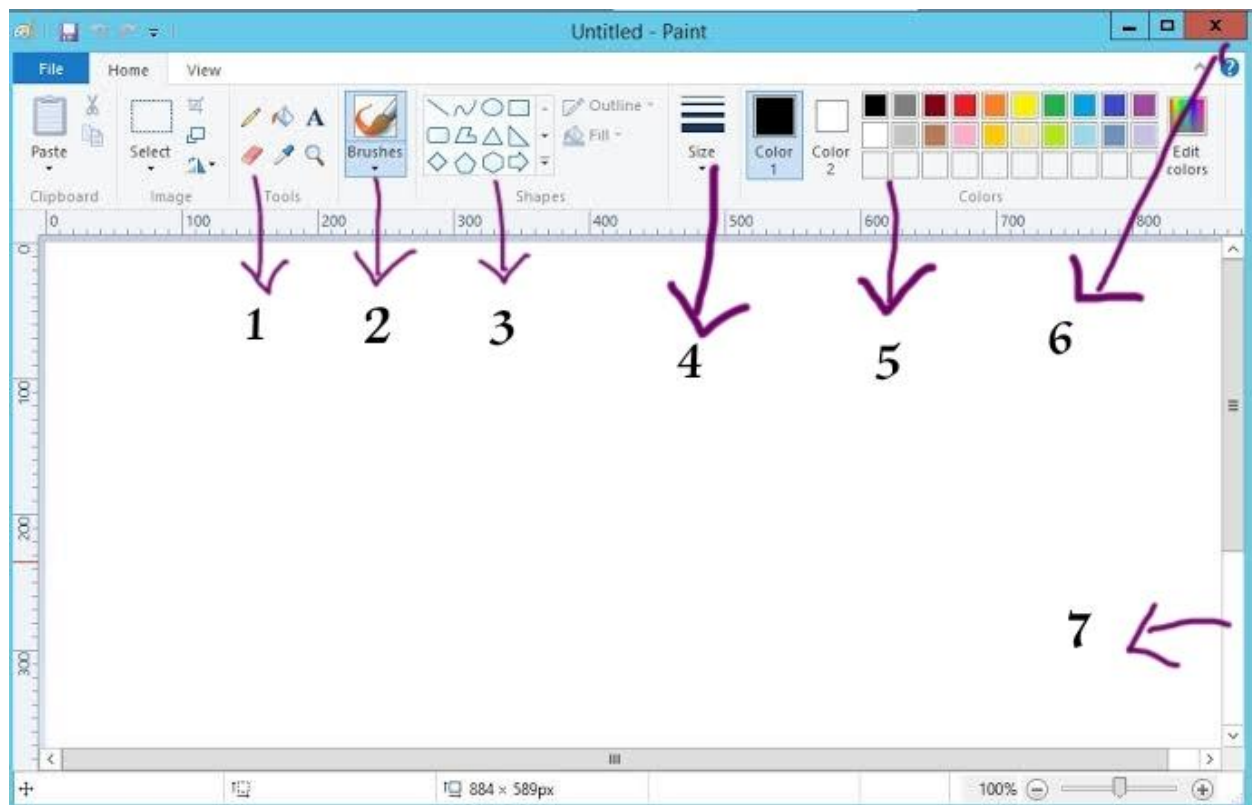
E. Give two examples of each

Hardware	Software

F. Answer these questions.

- What is paint?
- What is the use of start button?
- Name three icons on the desktop.
- What is system software? Give an example.
- Draw, colour and name one input device and one output device.
- What is windows?
- What is the use of show desktop button on the taskbar?
- What is the difference between a hard disk and a pen drive?
- Name any 3 types of brushes.

G. Label the following picture.





ASSINGMENT-13

Date : 30/08/2021

CLASS :- 3

Subject :-DRAWING

Fill colour in drawing book

(ART REDEFINED-3)

Page no.- 26,BEAR

AND

Page no.27,DOG