

**1. Answer these questions.**

- a. What did Alice see running close by ?
- b. Why did all the animals become sad ?
- c. Why did the policemen come to Meenal's house ?
- d. How many creatures did Cristina meet?
- e. How did the children spend their time on the seashore?
- f. What did Alice see on the sides of the well ?
- g. What was inside the parcel that Vinod found?
- h. How did John and Mariam feel about the shell?

**2 Write the meaning of the given words.**

- a. trotted off-
- b. earnestly-
- c. gleaming-
- d. still-
- e. saucer-
- f. creature-
- g. underside-
- h. bustle -
- i. mighty-
- j. dozing off-

**3. Make sentences with the following words.**

- a. prickly-
- b. cupboards-
- c. burrow -
- d. gleaming-
- e. mighty-
- f. jeweller-
- g. creature-
- h. bustle-
- i. treasure -
- j. model-

**4. Who is the speaker of the given lines?**

- a. " Good morning, Mr. Elephant."
- b. " Now , please stop weeping and crying and be a big ,strong fox ."
- c. "I'm a small little girl."
- d. " You must be tired and sleepy."
- e. "Dinah'll miss me very much tonight, I should think !"
- f. "You are very big."
- g. "I forgot what I was going to say."
- h. " Once in a while, it is good to be away and rest in the crocodile's mouth!"

---

**Note**- Students are instructed to learn and write the given assignment in a rough notebook.

**The answers of the assignment will be sent in the next assignment.**

---



गुरु गोबिंद सिंह पब्लिक स्कूल

विशेष-कार्य 23

कक्षा- 2

विषय-हिंदी

दिनांक- 01.02.22

---

**(क) प्रश्नों के उत्तर कॉपी में लिखो।**

1. मुंबई का नाम किस देवी के नाम पर पड़ा?
2. शेखचिल्ली ने गरम दूध में क्या-क्या डाला?
3. घुड़सवार कहाँ आकर रुके थे?
4. किसान कहाँ से पानी भरकर लाता था?
5. डॉक्टर केली किस अस्पताल में काम करते थे?
6. राजा ने महल में लौटकर मंत्री जी को क्या आदेश दिया?
7. पकने के बाद पपीते के बीज किस रंग के होते हैं?
8. सबसे पहले किसका जूता बना?
9. बबीता ने पौधा कहाँ लगाया था?
10. यह कविता किस जीव के बारे में है?
11. घर में घुसकर शेखचिल्ली कहाँ बैठ गए?
12. यदि मंत्री जी ने राजा का सुझाव मान लिया होता तो क्या होता?

**(ख) दिए गये शब्दों से वाक्य बनाओ।**

1. सुझाव
2. क्यारी
3. घुड़सवार
4. मरीज

5. खीर

6. डकैती

7. बीमारी

8. किसान

**(ग) किसने, किससे कहा?**

क. "मुझे भी साथ ले लो भाई!"

ख. "प्रजा की सुविधा के लिए सारी सड़क को चमड़े से ढक दिया जाए!"

ग. "काश! मैं भी जीवन में कोई नेक काम कर पाता!"

घ. "मैं क्या जानूँ बेटा, ऊपरवाला जाने!"

ड. "पैसे किस बात के?"

**(घ) निर्देशानुसार कार्य करो**

1. सीता किताब \_\_\_\_\_ है। (पढ़ती/ पढ़ता)
2. जो मूर्ति बनाता है। (अनेक शब्दों के लिए एक शब्द लिखो)
3. एक साल में \_\_\_\_\_ महीने होते हैं। (बारह/तेरह)
4. गुरुवार को \_\_\_\_\_ भी कहते हैं। (इतवार/बृहस्पतिवार)
5. भारी x \_\_\_\_\_ (विलोम शब्द लिखो)
6. बादल शब्द का समान अर्थ वाला एक शब्द लिखो।
7. जो लकड़ी का सामान बनाता है। (अनेक शब्द के लिए एक शब्द लिखो)
8. १२, १३ १४ \_\_\_\_\_, १६, \_\_\_\_\_ १८ (गिनती पूरी करो)
9. जनवरी और मार्च के बीच कौन-सा महीना आता है? (अप्रैल/फ़रवरी)
10. चार साल बाद फ़रवरी महीने में \_\_\_\_\_ दिन होते हैं। (29/28)

**(ड) 'बसंत-ऋतु' पर निबंध लिखो।**

(क) बसंत ऋतु फ़रवरी से लेकर अप्रैल महीने तक रहती है।

(ख) बसंत ऋतु को ऋतुओं का राजा कहा जाता है।

(ग) इस ऋतु में मौसम बहुत सुहावना रहता है।

(घ) बसंत ऋतु में न ज्यादा ठंड पड़ती है न ज्यादा गरमी पड़ती है।

(ड) इस ऋतु में पेड़-पौधों से पुराने पत्ते झड़ जाते हैं और उनकी जगह नए-नए पत्ते लगते हैं।

(च) इस ऋतु में खेतों में सरसों के पीले-पीले फूल दिखाई देते हैं।

(छ) बसंत ऋतु में होली, बसंत पंचमी आदि त्योहार मनाये जाते हैं।

**गृहकार्य- दिए गये कार्य को अपनी कॉपी में लिखकर याद करो।**

**बसंत ऋतु पर निबंध याद करो।**

Revision Assignment

SESSION 2021-22

STD:-2

SUBJECT:-MATHEMATICS

DATE:01.02.22

---

1.Fill in the blanks:-

- a. The answer of division is called \_\_\_\_\_.
- b. The answer of multiplication is called \_\_\_\_\_.
- c. The number by which we divide is called \_\_\_\_\_.
- d. When any number is multiplied by '0' the answer is always \_\_\_\_\_.
- e. The number to be multiplied is called \_\_\_\_\_.
- f. A non leap year has \_\_\_\_\_ days.
- g. The month that comes just after May is \_\_\_\_\_.
- h. The month that can have either 28 or 29 days is \_\_\_\_\_.
- i. A leap year has \_\_\_\_\_ days.
- j. The tenth month of a year is \_\_\_\_\_.
- k. The standard unit of length is \_\_\_\_\_.
- l. The standard unit of weight is \_\_\_\_\_.

2. Do as directed.

a) Convert :-

7m = \_\_\_\_\_ cm

4 m= \_\_\_\_\_ cm

8 km = \_\_\_\_\_ m

6 km= \_\_\_\_\_ m

b) Use the correct symbol ( >,< or =)

5 Rupees \_\_\_\_\_ 500 paise

2 Rupees 70 Paise \_\_\_\_\_ 3 Rupees

c) Write in words

₹ 37.68 \_\_\_\_\_

₹ 2510 \_\_\_\_\_

₹ 62.56 \_\_\_\_\_

d) Find the product

$16 \times 4 =$  \_\_\_\_\_


$12 \times 5 =$  \_\_\_\_\_

$13 \times 3 =$  \_\_\_\_\_

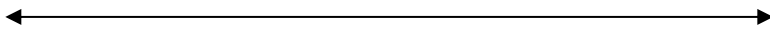
$12 \times 5 =$  \_\_\_\_\_

3. Multiply on number line.

$3 \times 5 =$



$2 \times 6 =$



4. Find the product.

1 0 5

X 3

\_\_\_\_\_

2 0

x 4

\_\_\_\_\_

3 2 6

X 4

\_\_\_\_\_

3 5

x 5

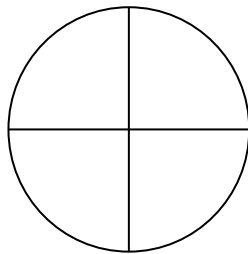
\_\_\_\_\_

5. Find the quotient

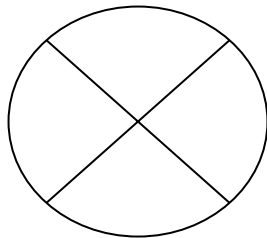
$$8 \overline{)40}$$

$$6 \overline{)24}$$

6. Colour as per the given fraction.



$$\frac{3}{4}$$



$$\frac{1}{4}$$

7. Add:-

m	cm
32	36
<hr/>	
+14	22

kg	g
43	363
<hr/>	
+ 32	153

a) Subtract:-

72 km	558 m
<hr/>	
-25 km	214 m

72 l	717 ml
<hr/>	
-51 l	306 ml



**8. Draw the clocks and show the time.**

**Half past 4**

**5 o'clock**

**Quarter past 3**

**Quarter to 6**

**9. Solve the following word problems with statements.**

- i. Rajan had 3 kg 500g of rice. He used 2kg 250 g of it. How much rice is left?**
- ii. Rani has 30 laddoos. She distributes the laddoos equally among 6 girls. How many laddoos did each girl get?**
- iii. Sunita has 5kg 500g of sugar. She used 3 kg 250 g of it. How much sugar is left?**
- iv. There are 53 mangoes in one basket. Find the total number of mangoes in 4 such baskets.**

Revision Assignment

Session-2021-22

Subject-EVS

Class -2

Date -01.02.22

---

1. Answer in one word :

- a) Which is our national song?
- b) A piece of land surrounded by water on all sides.
- c) Who was the first man to step on the moon?
- d) In which season trees shed their leaves ?
- e) Which animal has a very long neck?
- f) The tall and strong plant with thick woody stem.
- g) When do we celebrate Republic day?
- h) Whose birthday is celebrated as Gandhi jayanti?
- i) From where do we get silk?
- j) What is the name of our planet?

2. Give two examples of each:

- a) Landforms
- b) Creepers
- c) National festivals
- d) Things used in rainy season
- e) Types of plants
- f) Animals used to pull carts
- g) Scavengers
- h) Waterbodies on the earth
- i) Creepers
- j) Air transport

3. Fill in the blanks:

- a) Our national flag is called \_\_\_\_\_ in Hindi.
- b) Days are \_\_\_\_\_ in summer.
- c) Oceans have \_\_\_\_\_ water .
- d) A leap year has \_\_\_\_\_ days.
- e) There is no \_\_\_\_\_ on the moon.
- f) We get \_\_\_\_\_ and \_\_\_\_\_ from plants.
- g) Trains run on \_\_\_\_\_.
- h) On \_\_\_\_\_ ,people put colour on each other for fun.
- i) The \_\_\_\_\_ is our national bird .

4. Draw ,colour and name any two things used in summer season.

OR

Draw ,colour and name any two landforms.

## Revision Assignment No.23

Subject –GK

Class-2

Date-01.02.2022

**Note – Learn the answers of the given questions.**

- 1) Which is the national fruit of India?
- 2) Who invented telescope?
- 3) Who invented electric bulb?
- 4) Which is the famous dance of Gujrat?
- 5) What is the Indian currency?
- 6) In which festival sister ties rakhi on her brother's wrist?
- 7) In which festival people wear new clothes ,pray and eat sewaiyan?
- 8) Name the spice that adds flavour ,taste and colour to our food?
- 9) How many legs does a butterfly have?
- 10) How many bananas are there in a dozen?
- 11) How many states are there in India?
- 12) How many minutes are there in an hour?
- 13) Who is the Governer of RBI?
- 14) Which is the biggest three digit number?
- 15) Which internal body parts help to filter our blood?
- 16) Name any two musical instruments?
- 17) Which cartoon character acquires a watch ,that transforms him into different alien creatures?
- 18) Which country is called the land of spices ?
- 19) Which board game has four tokens and a dice?
- 20) Which is the fastest land animal ?
- 21) Name any one flightless bird?
- 22) Which festival is celebrated as the birthday of Jesus Christ?
- 23) Which is our national tree?
- 24) Who invented aeroplane?
- 25) Name any two activities that you do during leisure time?

# Assignment -23

Class-2

Subject-Moral Science

Date: 01.02..2022

---

## CHAPTER-12 Sure

### ways to success

#### Answer the following questions:

1. What was the serious situation that the animals were facing?  
Ans: The animals were facing a very disastrous drought.
2. Who was the presiding officer of the emergency meeting of animals?  
Ans: Lion Shambu was the presiding officer of the emergency meeting of animals.
3. Name any two personalities who overcame all the problems and became world famous.  
Ans: Stephen Hawking and Helen Keller overcame all the problems and became world famous personalities with their strong determination and perseverance .
4. Which animal is known as the dam specialist of the world?  
Ans: Beaver is known as the dam specialist of the world.
5. Do you agree with the statement determination and perseverance are sure ways to success?  
Ans:Yes, Determination and perseverance are sure ways to success.

-----XXXX-----



# **REVISION ASSIGNMENT**

Subject: Computer

Class- 2

Date: 31.01.2022

## **1. Fill in the blanks.**








- a. To \_\_\_\_\_ a computer means switching off the computer.
- b. After pressing the main power switch, you need to switch on the \_\_\_\_\_ .
- c. Once you have switched on the CPU, you need to switch on the \_\_\_\_\_ .
- d. \_\_\_\_\_ button has shut down option.
- e. \_\_\_\_\_ shows the name of your drawing and paint.
- f. The \_\_\_\_\_ tool is used to draw free hand lines.
- g. \_\_\_\_\_ tool is used to select a part of the image.
- h. \_\_\_\_\_ command is used select an area of a drawing and clear everything outside this area.

## **2. Write T for true and F for False.**

- a. The small pictures on the desktop are called icons.
- b. Desktop is the screen that appears after you shut down the computer.
- c. The last step in shutting down a computer is to switch on the main power button.
- d. Keys with special signs and symbols on them are called symbol keys.
- e. Spacebar is the longest key on the keyboard.

- f. A mouse has mostly four buttons.
- g. Delete key is used to move the cursor up, down, right and left.
- h. Rounded rectangles are used to draw circles.
- i. Curve shape is used to draw lines.
- j. You cannot draw any shape that has more than 4 sides in Paint.
- k. Foreground colour means the colour that is in the front.
- l. A pentagon has 5 sides.

3. Name the pictures:

- a.  \_\_\_\_\_
- b.  \_\_\_\_\_
- c.  \_\_\_\_\_
- d.  \_\_\_\_\_
- e.  \_\_\_\_\_
- f.  \_\_\_\_\_
-  \_\_\_\_\_



## **ASSINGMENT-22**

**Date : 31/01/2022**

**CLASS :- 2**

**Subject :-DRAWING**

**Fill colour in drawing book**

**(ART MAGIC-2)**

**Page no.- 42, CAKE**