

REVISION ASSIGNMENT(2021-22)

STD -3

Subject- English

Date - 31.01.2022

---

1. **Answer these questions.**

- a) Who was Captain Jenna?
- b) Who did the speaker live with?
- c) When did the roof get repaired?
- d) Why did Curio take a picture of Captain Jenna?
- e) How did Eugenie's mother surprise her?
- f) What did the wind do to the roof and the ceiling?
- g) What did Eugenie want to become when she grew up?
- h) What was Heidi trying to explain?
- i) Why did everything turn golden?

2 **Write the meaning of the given words.**

- a) assisted =
- b) surface =
- c) comfort=
- d) damp=
- e) conservation=
- f) spill =
- g) wobbles=
- h) nasty=
- i) orphan=
- J) quilts=
- k) ceiling=

l) scientist =

m) dome =

n) butler =

**3. Make sentences with the following words.**

a) aquarium -

b) captain -

c) assisted -

d) damp -

e) spill -

f) orphan -

g) scientist -

h) precious -

i) astronaut -

**4. Who is the speaker of the given lines?**

a) "Oh wow! I can see the two moons of Mars."

b) "How dare you make fun of me!"

c) "Well, that must have been quite a landing!"

d) "Hurry up! Miss Rottenmeier is very angry."

e) "Oh yes, DARK IS EXCITING."

f) "Dark is nasty."

g) "You can't be afraid of the dark. Owls are never afraid of the dark."

---

XXX

---

**NOTE- Students are instructed to learn and write the given assignment in a rough notebook.**

---

गुरु गोबिंद सिंह पब्लिक स्कूल  
जनवृत्त-५/ब,बोकारो इस्पात नगर

पुनरावृत्ति-कार्य(२३)

(पाठ्यपुस्तक)

(पाठ-११ से पाठ-२० तक)

कक्षा-तीसरी

विषय - हिंदी(सत्र:२०२०-२१)

दिनांक:-३१-०१-२२

प्रश्न-१ शब्दों के अर्थ याद करके लिखो।

1. आकृति = -----
2. इज़ाजत = -----
3. पच्चीकारी =-----
4. पैतृक = -----
5. निषंग=-----
6. ढलवाँ = -----
7. प्रशंसा =-----
8. स्वादिष्ट = -----
9. उज्ज्वल=-----
10. भ्रमण = -----

प्रश्न-२ निम्नलिखित प्रश्नों के उत्तर याद करके लिखो।

1. तौलने के सिद्धांत को विज्ञान में क्या कहते हैं ?  
-----|
2. बालक किसके समान मिटाना चाहता है और क्यों?  
-----|
3. कच्चा आम किस-किस काम आता है?  
-----|
4. शत्रु देश की राजधानी में तेनाली रामन के साथ कैसा व्यवहार हुआ?

5. रात के समय कैसा वातावरण था?

6. राणा प्रताप के घोड़े चेतक की क्या विशेषता थी?

7. लेखक के अनुसार कामयाबी का मतलब क्या है?

8. मंत्री ने युवक के पक्ष में राजा के सामने क्या दलील दी?

9. दानव के बगीचे में फिर से बहार कैसे लौटी?

10. एंड्रयूज भारत क्यों आए?

प्रश्न-3 निर्देशानुसार कार्य करो।

1. इच्छा = -----(पर्यायवाची शब्द लिखो।)

2. दोषी = -----(विलोम शब्द लिखो।)

3. कविता लिखने वाली = -----(अनेक शब्दों के लिए एक शब्द लिखो।)

4. शिव = -----(अनेकार्थी शब्द लिखो।)

5. कान पकड़ना = -----(मुहावरे का अर्थ लिखो।)

6. इक्कीस = -----(अंकों में लिखो।)

प्रश्न-५ 'बसंत ऋतु' के बारे में लेख लिखो।

बसंत ऋतु ऋतुओं का राजा है। बसंत ऋतु शीत ऋतु के बाद आती है। यह ऋतु फरवरी से मार्च के बीच रहती है। इस ऋतु में मौसम सुहावना होता है तथा रंग-बिरंगे फूल खिलते हैं। बसंत ऋतु में खेतों में सरसों के पीले फूल, टेसू के फूल तथा आमों में मंजर लग जाते हैं साथ ही कोयल की कूक भी सुनाई देती है। इस मौसम में ना अधिक ठंड और ना अधिक गर्मी पड़ती है। इस ऋतु में बसंत पंचमी, होली इत्यादि त्योहार मनाए जाते हैं। यह ऋतु जीवन में उल्लास और उमंग भर देती है।

प्रश्न-४ 'होली' त्योहार के बारे में लेख लिखो।

होली आनंद और मस्ती का त्योहार है। होली का त्योहार फाल्गुन महीने की पूर्णिमा को मनाया जाता है। यह दो दिनों का त्योहार है। पहले दिन शाम को होली जलाई जाती है। स्त्रियाँ नई फसल के अन्न से होली की पूजा करती हैं। दूसरे दिन लोग रंग खेलते हैं। पिचकारी में रंग भरकर एक-दूसरे पर डालते हैं। लोग एक-दूसरे को अबीर-गुलाल भी लगाते हैं। होली खेलने के बाद लोग तरह-तरह के पकवान खाते हैं। एक-दूसरे के घर जाकर गले मिलते हैं। तरह-तरह के पकवानों से एक-दूसरे का स्वागत करते हैं। सचमुच, होली रंगों का त्योहार है।

गृह-कार्य:-

'होली' तथा बसंत ऋतु लेख याद करो ।

होली तथा बसंत ऋतु का दृश्य बनाकर उसमें रंग भरो।

-----समाप्त-----

## Assignment – 23 (Revision)

### Subject - Maths

Class- 3

Date- 31.01.22

### Unit. 8. Time and Unit. 9. Fractions

#### **I. Fill in the blanks.**

1. Fractions having different denominators are called \_\_\_\_\_ fractions.
2. The hour hand takes \_\_\_\_\_ hours to complete one rotation.
3. The minute hand moves from 6 to 8 in \_\_\_\_\_ minutes.
4. Half past 7 in the morning = \_\_\_\_\_ (Write the time using a.m. or p.m.)
5. 1 century = \_\_\_\_\_ years.
6. Fractions having same value are called the \_\_\_\_\_ fractions.
7. There are \_\_\_\_\_ days in a week.
8. Quarter hour = \_\_\_\_\_ minutes.
9. 1 decade = \_\_\_\_\_ years.
10. \_\_\_\_\_ one fourths will make a whole.
11. January comes just before \_\_\_\_\_.
12. There can be never less than \_\_\_\_\_ Mondays in a month.
13. For a year to be a leap year, it should be divisible by \_\_\_\_\_.
14. A fraction with numerator 1 is called a ----- fraction.
15. Fractions having same denominators are called \_\_\_\_\_ fractions.

#### Answers:

1. Unlike Fractions	2. 12	3. 10	4. 7:30 am	5. 100 years
6. Equivalent Fractions	7. 7 days	8. 15	9. 10 years	10. 4
11. February	12. 4	13. 4	14. Unit	15. Like

## II. Write the fraction whose

- 1) Numerator - 6      Denominator - 11      (2) Denominator – 8      Numerator - 5

## III. Write the following dates in numerals.


- 1) January 13, 2004      2) August 19 ,2009

## IV. Write the time using a.m and p.m.

- 1) 3:35 at night      2) Half past 3 in the afternoon.


## V. Draw the hands of the clock and show the following time.

A.



Quarter to 10

B.



Quarter past 10

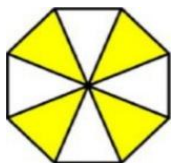
## VI. Write the following fractions in (i) ascending order and (ii) descending order.

a.  $\frac{3}{5}, \frac{4}{5}, \frac{5}{5}, \frac{2}{5}$

b.  $\frac{3}{8}, \frac{7}{8}, \frac{6}{8}, \frac{4}{8}$

## VII. Write the fractions for the shade part.

a.



b.



c.



## Solve the problems.

1. There was 716 ml of milk in a bowl .A cat drank 119 ml of the milk how much milk is left in the bowl?
2. A tub contains 115 litres 213 ml of water. Another tub contains 23 litres 20ml more water than the first tub. Find the quantity of water in the other tub.
3. A wooden block weighing 47 kg 930 g is cut into two pieces. If one piece weighs 37 kg 692 g find the weight of the other piece.

=====

## Assignment – 23(Revision)

### Subject -EVS

Class- 3

Date- 31.01.22

The given assignment should be completed in EVS notebook.

#### I. Fill in the blanks.

1. \_\_\_\_\_ was the first human to go to space.
2. Soil is formed by breaking of \_\_\_\_\_.
3. The study of stars is called \_\_\_\_\_.
4. During the day time plants take in \_\_\_\_\_ from the air.
5. An \_\_\_\_\_ is called the farmer's friend.
6. A slow moving wind is called \_\_\_\_\_.
7. The earth is surrounded by a blanket of air called \_\_\_\_\_.
8. Sugar is a \_\_\_\_\_ substance.
9. Changes in seasons are caused due to the earth's \_\_\_\_\_.
10. The \_\_\_\_\_ is a star.
11. \_\_\_\_\_ soil is very sticky.
12. Huge pits on the surface of the moon are called \_\_\_\_\_.
13. A \_\_\_\_\_ is a model of the earth.
14. \_\_\_\_\_ is used as a fuel.
15. \_\_\_\_\_ are chemicals used to kill harmful insects.

#### \*Answer key.

1. Yuri Gagarin.
2. rocks.
3. astronomy.
4. carbon dioxide.
5. earthworm
6. breeze
7. atmosphere
8. soluble
9. revolution
10. Sun
11. Clayey
12. craters
13. globe
14. Coal
15. Pesticides



## II. Define the terms.

1. Astronaut    2. Cosmonaut    3. Humus    4. Gravel    5. Breeze    6. Storm  
7. Water Cycle    8. Evaporation    9. Condensation    10. Satellite    11. Rotation  
12. Revolution    13. Pollution    14. Environment    15. Pesticides

### \*Answer key.

1. **Astronaut**- A space traveller who is trained and certified by American space agency is called an astronaut.
2. **Cosmonaut** – A space traveller who is trained and certified by Russian space agency is called a cosmonaut.
3. **Humus**- A substance made from dead leaves and plants which help plants to grow faster is called humus.
4. **Gravel**- The small pieces of rocks that are unable to hold water and is used for making roads are called gravel.
5. **Breeze** – When wind blows gently it is called breeze.
6. **Storm** – A strong wind with rain or snow is called storm.
7. **Water cycle**- The change of water into water vapour and then to water again is called water cycle.
8. **Evaporation** – The change of water into water vapour on heating is called evaporation.
9. **Condensation** – The change of water vapour into water on cooling is called condensation.
10. **Satellite**- An artificial body revolving around the planets in an orbit is called a satellite.
11. **Rotation** – The spinning of the earth round its own axis is called rotation.
12. **Revolution** – The movement of the earth around the sun in a fixed path is called revolution.
13. **Pollution**- Making the environment dirty, impure and unfit for human use is called pollution.
14. **Environment**- Everything that makes our surroundings is called environment.
15. **Pesticides** – Chemicals used to kill harmful insects are called pesticides.

## III. Activity

1. Draw, colour and label the structure of the earth.
2. Draw, colour and label the solar system.

-----X-----

# Assignment-23

Sector-5/B,B.S.City  
Session-2021-22  
Revision

Class- 3

Subject- **General Knowledge**

Date-31.01.2022

*\*Students are instructed to learn and revise the given assignment.*

**A. Choose the right answers.**

1. A drawing scribbled or scratched on a wall is called \_\_\_\_**graffiti**\_\_\_\_\_.  
a. sketch                      b. graffiti                      c. doodling
2. Which of these artists is not a painter?  
a. Amrita Sher – Gil              b. Satish Gujral                      c. Uday Shankar

Ans. **Uday Shankar**

3. Where are cave paintings found in India?  
a. Ajanta              b. Khajuraho                      c. Kanyakumari

Ans. **Ajanta**

**B. Answer the following questions.**

1. Name the dance form which originates from the state of Gujarat?  
Ans. Garba is the dance form which originates from the state of Gujarat.
2. Which game is also known as soccer?  
Ans. Football is also known as soccer.
3. In which movie Mowgli with the help of his friends defeats Shere Khan?  
Ans. The name of the movie is ' The Jungle Book' .
4. Where was the first modern Olympic Games held?  
Ans. The first modern Olympic Games were held in Athens.
5. Which planet is closest to the sun in our solar system ?  
Ans. The name of the planet is Mercury.
6. Which Indian cricket player is nicknamed ' Cheeku' ?  
Ans. The name of the cricket player with the nicknamed Cheeku is Virat Kohli.
7. What is the capital of France?  
Ans. The capital of France is Paris.
8. Who was the first man to walk on the moon?  
Ans. Neil Armstrong was the first man to walk on the moon.
9. How many years make a millennium if 10 years make a decade?  
Ans. 1,000 years make a millennium if 10years make a decade.
10. Which tower is named after its designer and engineer Gustave Eiffel?  
Ans. Eiffel Tower is named after its designer and engineer Gustave Eiffel.
11. What is a mural?  
Ans. A mural is a wall painting.
12. How much year was taken by Manjhi to carve a path through a big hill with only a hammer and a chisel?  
Ans. It took him 22 years to carve a path through a big hill with only a hammer and a chisel.
13. Which is the most popular football competition?  
Ans. **FIFA WORLD CUP** is the most popular football competition.
14. Which palace is known for the for the residence of the queen of England?



Edit with WPS Office

**Ans.** The name of the plant is dancing plant.

d. The capital of France is Paris .

÷÷xxxxxxxxxxxxxxxxxx÷÷xx÷÷÷÷p÷÷÷÷÷÷÷÷÷÷÷÷÷÷÷÷÷÷÷÷÷÷÷÷

# ASSIGNMENT- 23

## SESSION-2021-22

Class- 3

Subject- Moral Science

Date-31.01.2022

### REVISION

*\*Students are instructed to learn the answers of the given questions .*

#### A. Answer the following questions-

1. What did the pigeons finally do after being caught in the net?  
Ans. All the pigeons tried together to uproot the net and fled away with the net.
2. Why is Man a social animal?  
Ans. Man is a social animal because he lives in a society and helps us.
3. Who had a nap?  
Ans. The bear had a nap and went to sleep.
4. What can we learn from the nature?  
Ans. We can learn from the nature to be happy.
5. How does a farmer help us?  
Ans. A farmer grows crops for us.
6. How should we behave with our helpers?  
Ans. We should behave politely with our helpers.
7. Why are lazy people always late?  
Ans. Lazy people are always late because they are not serious about anything.
8. Who took pity on the woodcutter?  
Ans. The angel took pity on the woodcutter.
9. What happens if a person does not have patience?  
Ans. If a person does not have patience he will have to suffer.
10. Why is time valuable?  
Ans. Time is valuable because it does not wait for anyone.
11. Do you like to fight with your best friend?  
Ans. No, I don't like to fight with my best friend.
12. Who served the saint properly?  
Ans. Dhanpat served the saint properly.
13. Who was watching everything carefully?  
Ans. The friend on the tree was watching everything carefully.
14. Who was the real friend of Sudama?  
Ans. Krishna was the real friend of Sudama.
15. Name the king whose respect towards his soldiers made him win their trust and honour.  
Ans. The name of the king was 'Alexander the Great'.
16. When did the bear reach the party?  
Ans. The bear reached the party late and it was over by the time.
17. What happens when we are not united?  
Ans. When we are not united anybody can divide us and rule over us.

#### B. Give one word for the following people.

1. The one who teaches in the class. Teacher
2. The one who cleans our surroundings. Sweeper
3. The one who compose music. Musician

- XXXXXXXXXX-XXXXXXXXXXXXXXXXXXXX-XXXXXXXXXXXXXXXXXXXX-XXXX-XXXXXXXXXXXXXXXXXXXX

# REVISION ASSIGNMENT

CLASS: 3

SUBJECT: COMPUTER

DATE: 31/01/2022

**Write T for true and F for false.** (To be done in textbook pg no 80)

1. The DIFFERENCE function is used to subtract two numbers.

F

2. The LABEL command moves the turtle.

F

3. FD 5+3 will move the turtle 8 steps.

T

4. The result of calculations is displayed in the Recall List Box.

T

5. The QUOT command is used to divide two numbers.

F

6. PR "Book will give an error message.

F

---

## **A . Fill in the blanks.**

a. \_\_\_\_\_ function is used to add two numbers.

b. \_\_\_\_\_ button reduces the window to a small icon on the taskbar.

c. The File tab is on the \_\_\_\_\_ corner of the Ribbon.

d. The triangular shaped pointer of Logo is called \_\_\_\_\_.

e. The \_\_\_\_\_ contains tabs.

f. The symbol of multiplication is \_\_\_\_\_.

g. A monitor is also called \_\_\_\_\_.

h. The commands are typed in the \_\_\_\_\_.

i. The \_\_\_\_\_ scroll bar is used to scroll the page up and down.

j. \_\_\_\_\_ is fixed inside the CPU box.

k. The \_\_\_\_\_ is at the top of the MS Word window.

l. There are \_\_\_\_\_ scroll bars in a window.

**B. Write T for true and F for false statements.**

- a. There are 3 scroll bars.
- b. PR " Book will give an error message.
- c. The Logo screen is divided into two parts.
- d. The turtle has two parts head and tail.
- e. The short form of LEFT command is LF.
- f. The result of PR 36/9 is 4.
- g. Speakers are used to hear sounds and music.
- h. The LABEL command moves the turtle.
- i. The Minimize button reduces the window to a small icon on the taskbar.
- j. The title bar contains tabs.
- k. The save button is on the Quick Access Toolbar.
- l. The file tab is on the right corner of the Ribbon.

**C. Write full forms of the following.**

- a. CT –
- b. CRT
- c. PR –
- d. QAT
- e. CPU –
- f. FD –

**D. Write Short forms.**

- a. Right turn -
- b. Cathode Ray Tube -
- c. Backward -
- d. Left -
- e. Clear screen -



## **ASSINGMENT-22**

**Date : 31/01/2022**

**CLASS :- 3**

**Subject :-DRAWING**

**Fill colour in drawing book**

**(ART REDEFINED-3)**

**Page no.- 58, RABBIT PAPER CLIP,**

**Page no.-61, LAND SCAPE**

**AND**

**Page no.-63, MUSHROOM**