

GURU GOBIND SINGH PUBLIC SCHOOL
SECTOR 5/B, BOKARO STEEL CITY
FINAL REVISION ASSIGNMENT
SESSION: 2019- 2020

Class – IV

Subject – English
SECTION – A (READING)

A. Read the passage carefully:

Pranayam is control and extension of breath. By practising it, we can reduce our breathing rate. Reduced breathing rate has a lot of benefits. It slows down heart rate, reduces blood pressure and relaxes body and mind. Pranayam increases our life expectancy. Pranayam should be done on an empty stomach, preferably in the morning. You can also do it in the evening but there should be a gap of four hours after the last meal.

Answer the following questions:

1. What is Pranayam?
2. What are the benefits of practising Pranayam?
3. What are the benefits of reduced breathing rate?
4. When should we do Pranayam?

B. Read the passage carefully:

Bears are not quite as dangerous as people imagine them to be like most animals, they will do their best to avoid human being. However bears are by no means cowardly animals. Many hunters have been killed by bears for they can be extremely dangerous and cunning. Bears have a strong sense of smell but they have very poor eye-sight. They are also dull of hearing but they are very intelligent.

Choose the correct answer:

1. What is true about a bear among the following:
a. simple b. not very dangerous c. human friendly
2. What does people imagine about bear?
a. dangerous b. friendly
3. What does bear avoid like most animals?
a. hunters b. human being c. fish
4. What kind of animal is bear?
a. helpful b. cunning c. coward
5. What is the strongest sense of a bear?
a. touch b. sight c. smell

Fill in the blanks:

6. have been killed by bears.
7. Bears have very poor

SECTION – B (WRITING)

- C. Write a letter to your friend sharing your time spent during winter vacation.
- D. Write a paragraph on the topic ‘ Importance of water.’
- E. Picture writing : Picture of missing school bus .

Name of book : English Grammar 4

Lesson – 9 , Adverbs

Page no : 59

SECTION – C (GRAMMAR)

F. Fill in the blanks with the correct possessive adjectives.

1. They have done (their/ theirs) homework.
2. What has she done to (her/ hers) hair?
3. We can't use this room. (Her/ Its) not clean.

G. Circle the adverbs and underline the verbs they describe.

1. We spent our winter vacation happily.
2. We sat silently in the library.
3. Do not go anywhere.

H. Write suitable prepositions of time to complete the following sentences.

1. Our examination will start Monday.
2. Khushi's birthday is March.
3. The flight will take off 5 p.m.

I. Circle the correct conjunctions in the brackets to complete the sentences.

1. Khushi (and/ but) Vikram live in the same city.
2. Ram reached the station in time (so/ because) he caught the train.
3. I do my homework (before/ but) I watch television.

J. Rewrite these sentences so that the subjects agree with the verbs.

1. People is working hard in India.
2. He watch a movie.
3. It have boring stories.

SECTION – D (LITERATURE)

K. Answer any four questions.

1. What lesson did the girls teach the boys?
2. When do the meadows laugh?
3. What did Bhasmasura do with his power?
4. Who do you think the dancer was?
5. What kind of a town was Vishnupur?
6. How did Seema and Arun rescue the man?
7. Do you think Grany knows how to use her laptop? Why? Why not?
8. Why did the new girl look sad and lonely?

L. Read the given extract and answer the questions that follows:

‘ He must have gone to the cave? ‘

1. Who is the speaker of the above line?
2. Who is ‘He’ in the above line?
3. What did the speaker find at the entrance of the cave?

M. Write the meaning of given words:

1. Flans
2. Merry wit
3. Crumbling
4. Duo

THE END

Class 4

Subject: Hindi

प्रश्न 1) नीचे लिखे गद्यांश को पढ़कर दिए गए प्रश्नों का उत्तर :

अपठित गद्यांश

एक बार एक किसान का बैल गहरे गड्ढे में गिर गया। वह जोर जोर से चिल्लाने लगा। किसान उसे बहार निकलने का उपाय सोचने लगा। अंत में उसने निर्णय लिया कि बैल काफी बूढ़ा हो चुका है, इस लिए उसे गड्ढे में ही दफना देना चाहिए। किसान ने अपने सभी पड़ोसियों को मदद के लिए बुलाया। सभी मिलकर गड्ढे में मिट्टी डालने लगे। जैसे ही बैल को सब समझ में आया, वह और जोर जोर से चिल्लाने लगा और फिर अचानक शांत हो गया।

सब लोग चुपचाप गड्ढे में मिट्टी डालते जा रहे थे। तभी किसान ने नीचे झांककर देखा तो वह चकित रहे गया। अपनी पीठ पर पड़ने वाली मिट्टी को वह बूढ़ा हिला हिलाकर नीचे गिरा देता था और उस मिट्टी पर चढ़ जाता था। जल्दी ही वह गड्ढे के किनारे तक पहुंच गया और फिर अपनी हिम्मत और सूझ बुझ के बल पर बहार आने में सफल हो गया।

अपठित गद्यांश के आधार पर निम्न प्रश्नों के उत्तर दीजिये :-

(क) किसान का बैल (कहाँ) गिर गया।

(ख) बैल का चिल्लाना सुन कर किसान से क्या निर्णय लिया (?)

(ग) किसान के पड़ोसियों ने उसकी मदद किस प्रकार की (?)

(घ) किसान चकित क्यों रह गया (?)

(इ) शीर्षक लिखिए गद्यांश का उचित।

प्रश्न 2) नीचे लिखे प्रश्नों का उत्तर दें :

क) द्रोणाचार्य का सिर लाचारी से क्यों झुक गया ?

ख) उत्तम स्वभाव वाले व्यक्तियों की क्या विशेषता होती है ?

ग) महात्मा ने दूसरी शर्त क्या रखी ?

घ) गांव वासी कैसे स्वभाव के होते हैं ?

ङ) नदी को किस बात का संतोष रहता है ?

च) सावित्री अपने पति के दीर्घायु होने की कामना क्यों करती है ?

छ) किसान के बेटे गड्ढर क्यों नहीं तोड़ पाए ?

प्रश्न 3) नीचे लिखे शब्दों का अपने वाक्य में प्रयोग करें :

क) अतिथि ख) स्वतंत्र (कल्याण) च) काल इ) प्राचीन (प्रतिज्ञा) घ) ईमानदारी ग) (

प्रश्न 4) नीचे लिखे शब्दों का अर्थ :

क) विह्वल ख) उत्तम (निवृत्त) इ) उल्लंघन घ) दीर्घायु ग) (

चलक्ष्य (मोद) ज) पाबंदी छ) (

प्रश्न 5) नीचे लिखे अनेक शब्दों के लिए एक शब्द लिखें :

क) सब कुछ जानने वाला

ख) वर्षों का समूह 10

ग) जो देखने वाला हो

घ) साथ पढ़ने वाला

ङ) जहां चार रास्ते मिलते हैं

च) बहुत बोलने वाला

छ) जो कभी ना मरे

प्रश्न 6) क्रिया की परिभाषा उदाहरण सहित लिखें।

प्रश्न 7) तीन दिनों के अवकाश के लिए प्रधानाचार्य को पत्र लिखें।

प्रश्न (8) निम्नलिखित विषयों में से किन्हीं पर अनुच्छेद लिखें 1:

क) ग्रामीण जीवन ख होली (ग समय का महत्व (

प्रश्न (9) नीचे लिखे शब्दों का दो दो पर्यायवाची शब्द लिखें :

क) पेड़ ख साँप (संसार च (वायु ड (रात घ (बादल ग (

प्रश्न (10) नीचे लिखे शब्दों का विलोम लिखें :

क) महात्मा ख हर्ष (वरदान घ (यश ग (ड (विषय (सम्मान च (

उत्तम (शुभ झ (संतोष ज

प्रश्न (11) नीचे लिखे प्रश्नों को निर्देशों अनुसार बनाएं:

- क) राकेश एक अच्छा बालक है । (शब्द को छांटें। संज्ञा)
- ख) महात्मा जी ने प्रवचन.....। (उचित क्रिया शब्द भरे।)
- ग) टोकरी में आम रखे। (है/ हैं उचित शब्द भरे ।)
- घ) किसान परिश्रमी होते हैं। (विशेषण शब्द छांटें ।)
- ङ) विद्यालय के मैदान में लड़का खड़ा है ॥ पुनः इस वाक्य का वचन बदलकर लिखें ।
- च) तुम बाजार से आलू गोभी और कटहल लेते आना इस वाक्य में उचित विराम चिन्ह लगाएं ।
- छ) शेर.....रहा है । (उचित क्रिया शब्द भरे ।)
- ज) हम तीन भाई हूँ । (वाक्य को शुद्ध करके पुनः लिखें ।)



Guru Gobind Singh Public School
Sector- V B, B. S. City
Annual Revision Assignment: 2019- 20
Subject: E.V.S.

Std.- IV

General Instructions

Section A-Each question carries 01 (one) mark

Section B- Each question carries 01 (one) mark

Section C- Each question carries 02 (two) marks

Section D - Each question carries 2½ (two and half) marks

Section A

1. Choose the correct answer.

(1 X 5= 5 mark)

a. State of matter that does not have a definite volume is

i. solid ii. liquid iii. gas

b. The traditional dress of Indian woman is

i. Kimono ii. jeans iii. saree

c. Magnet attract

i. iron ii. plastic iii. rubber

d. The Indian name of the planet Mercury is

i. Mangal ii. Budh iii. Arun

e. Fog is visible during

i. summer ii. winter iii. floods

Section B

2. Write true or false

(1 x 4 = 4 marks)

a. CNG is an eco-friendly fuel.

b. Sedimentation follows decantation.

c. All terrestrial plants are found on land.

d. Sun is the ultimate source of energy

3. Fill in the blanks

(1 x 4 = 4 marks)

a. Hydrogen gas is _____ in water.

b. _____ fibres do not require ironing.

c. _____ energy is used to move wind mills.

d. Hot air is _____ than cold air.

4. Give two examples.

(1 x 3= 3 marks)

a. Fossil fuels.

b. Artificial satellites.

c. Movements of the earth.

5. Give one word for the following.

(1 x 4 = 4 marks)

a. The force that opposes motion.

b. Planet with rings.

c. Name a form of condensation seen in nature.

d. A chemical used to kill germs present in water.

6. Match the following.

(1 x 3= 3 marks)

Column- A

Column -B

a. Water pollution

i. heavenly bodies

b. Telescope

ii. melting of ice

c. Physical change

iii. jaundice

Section C

7. Distinguish between :

(2 x 3 = 6 marks)

a. Rotation and revolution.

b. Evaporation and condensation.

c. Natural fibre and synthetic fibre.

8. Define the following terms (Attempt any four). (2 x 4 = 8 marks)

- a. Energy
- b. Solar system
- c. Water table
- d. Pollutants
- e. Habitat

9. Answer any four of the following questions.

(2 x 4 = 8 marks)


- a. How does wind blow?
- b. How do water bodies get polluted?
- c. What causes the formation of seasons?
- d. List two effects of force.
- e. Why do you wear a uniform to school?

Section D

10. Attempt any two of the following.

(2 x 2½ = 5 marks)

- a. Draw a symbol that denotes recycle.
- b. Draw and label water cycle.
- c. Draw and name two simple machines.



GURU GOBIND SINGH PUBLIC SCHOOL
SECTOR-5/B, BOKARO STEEL CITY
REVISION ASSIGNMENT FOR ANNUAL EXAM(2019-2020)

CLASS:IV

SUB:MATHS

1. Fill in the blanks:-

a)The smaller number which is subtracted is called the-----.

b) 57L=

c) $0 + \dots = 4089$

d) 1 century =

e) The perimeter is the measure of of a figure.

f) A cone hasedges and..... Faces.

g) A circle has lines of symmetry.

h) Every graph must have a..... .

2. Convert:

a)7506ML in Litres and Millilitres.

b)72 kg65g in gram.

c)2hours 35 minutes in minutes.

d)150 minutes in hours.

e)15 days in weeks and days.

f) 4weeks 6days in days.

3.Add:

a)31m 76 cm and 39m 27cm.

b)248L 315ml and 458L 960 ml.

c) 6hours 45 minutes and 11 hours 39 minutes.


d)Rs.33.88, Rs 2.15 and Rs 0.93

4.Subtract:

a)16m76cm from 32m25cm.

b)83L 448 ml from 95L 368 ml.

c)4 hours 42 minutes from 9 hours 36 minutes.



d)Rs 5.48 from Rs 43.21

5. Simplify:

4931-1621+2879.

6.What time would it be?

a)3 hours after 7:30 p.m

b) 5 hours before 12 midnight.

7.Draw a cube and its net.

8.Draw the lines of symmetry in

a)

M

b)

8

9. Use the mirror line to complete the figure:

a)

E

b)

7

10. Write the decimal in words:

a)27.06

b)98.542

11. Write the expanded form:

a)96.84

b)705.083

12. Find the place value of 5 in

a)520.187

b) 72.105

13. Write the following as decimals:

a)12

b)28

14. The sum of two numbers is 60,401. If one number is 58,735 find the other number.

15. Mr. sinha earned Rs.3,47,450 in two years. In one year, he earned Rs. 88,673. How much did he earn in the other year?

16. If one dozen eggs cost Rs.119.15, how much will 10 dozen of eggs?

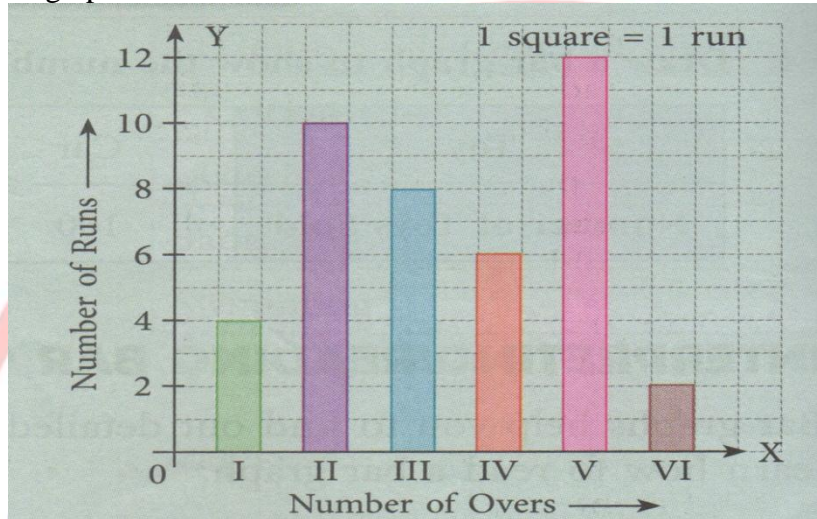
17. Sunil is 6 kg 289g heavier than Ramesh who weighs 37 kg 545g. What is Sunil's weight?

18. Ramesh travelled 7km 250m in the first hour and 5km685m in the second hour. How far did he travel in the two hours?

19. Radhika bought 20 kg 667g rice. After few days, she sold 10kg 625g rice. How much rice is left with her?

20. Mr. Verma's office starts at 10 a.m & closes at 6 p.m. How many hours does the office remain open?

21. The perimeter of a rectangle is 52 cm. The length of the rectangle is 14 cm. Find its breadth.
22. What is the length of the side of a square whose perimeter is 160 cm?
23. Find the area of a rectangle with length 12 cm and breadth 4 cm.
24. Find the area of a square field of side 70 m?
25. Find the perimeter of a rectangular strip, 53 cm long and 5 cm wide.
26. Draw a clock to show the time 5:45 and Write the time in two ways.
27. Fill in the missing number and Write the rule for each pattern :
 a) 2, 4, 12, 48, ..., b) 6, 12, 22, 44, ...,
28. The bar graph shows runs scored in six overs of a bowler in IPL. Now answer the questions.



- a) In which over did the bowler give the most runs?
- b) In which over did he bowl well?
- c) In which over the runs made were twice the 1st over.
- d) How many total runs did the bowler give in his overs?



GURU GOBIND SINGH PUBLIC SCHOOL

SECTOR V/B,B.S.CITY

FINAL Assignment (2019-20)

CLASS: 4

SUBJECT: COMPUTER

1) Complete the following :-

- a) I am also known as 'Graphics Screen in 'MSWL Logo'.

| | | | | | | | | |
|---|--|---|--|---|--|---|--|---|
| M | | I | | S | | R | | N |
|---|--|---|--|---|--|---|--|---|

- b) I am used to set the thickness of the line that turtle draws.

| | | | | | | |
|---|--|--|---|--|--|---|
| P | | | S | | | E |
|---|--|--|---|--|--|---|

- c) I am the button that is used to open 'Editor' window in MSW Logo.

| | | | | |
|---|--|---|--|---|
| E | | A | | L |
|---|--|---|--|---|

- d) I am the command used to bring the turtle to its starting position.

| | | | |
|---|--|---|--|
| H | | M | |
|---|--|---|--|

2) Find out the hidden words from the given letters:-

- a) BRPDAOCIL _____
b) ETRSNIGNI _____
c) EMNTOUCD _____
d) ETEPAR _____
e) NODU _____

3) Marks the following in sequence/steps:-

To create a new Folder

- a) Right click on the mouse button on the blank space of the desktop. Step
b) New folder with the given name will appear on the desktop.
c) A sub-menu will appear, then select the 'Folder' option
d) A pop-up menu will appear .Take the mouse pointer to 'New'.
e) Type the name of the folder and then press 'Enter' key.

4). Select the suitable alternatives:-

- a) Rohan has drawn a tortoise on the workplace which is facing towards right but he wants to make it face left. Among the following, which option should he prefer to get the desired job? 'Draw is a part of _____ suite.
i) Dragging ii) Flipping iii) Rotating iv) None of these
- b) Puja has a drawn apicture of smiley but while making lips she had a problem and was unable to draw it properly. Which tool she could prefer to do this easily
i) Curve Tool ii) Pencil Tool iii) Ellipse Tool iv) None of these
- c) Sudha has drawn a beautiful poster on the occasion of Diwali. She typed text on it but it does not look attractive .Which of the option she would apply to make the poster eye catching
i) Artwork ii) WordArt iii) ClipArt iv) Font work

5) State True or False:-

- a) Turtle is used as a pencil for drawing.
b) Primitive RT moves the turtle in its right position.

- c) The turtle looks similar to triangle.
- d) ‘,’ LOGO operator is used for division.
- e) ‘PRODUCT’ command is used for multiplication.

6) Write the difference between following commands:-

- a) HT and ST
- b) PU and PD

7) Write the helps of LOGO primitives, find the solution of the following:-

- a) How much is twelve times six decreased by six times twelve?
- b) Priyanshu is trying to draw a semicircle by typing REPEAT 240[FD 1 RT 1] primitive. But his teacher feels that it will not be a perfect semi-circle and tells him to try again. Rectify the error in his program.
- c) Suppose your home is 5 km away from the school and your friend’s house is 7 km away from the school in the opposite direction from yours. How long is the distance of your house from your friend’s house? Find the using LOGO primitives.
- d) Ankit buys two dozen bananas from a super market store .He wants to distribute the bananas among his four children .Use LOGO operator to find how many bananas can be distributed to each child ?

8). Write short Notes on :-

- a) CPU
- b) Website
- c) Web Browser
- d) Analytical Engine

9) Answer the following Questions:-

- a) List any two rules of online safety.
- b) What is Folder?
- c) Explain about ‘MSW Logo turtle’.
- d) What is insertion point?

10) a) Draw the coloured diagram of the following icons:-

- i) Mozilla Firefox
- ii) Internet Explorer
- iii) Google chrome

b) Draw the diagram of Folder Tree

