

## ASSIGNMENT - 9 , SESSION-2020-21

CLASS-I

SUBJECT-ENGLISH

---

General instruction :Do the following work in the English grammar book.

### WORKSHEET - 3

B. Complete these sentences with words from the story .

1. Manu and Grandpa go to the beach .
2. Grandpa sits on the sand .
3. Manu wants to sit on a big rock .
4. Manu shouts because he is scared .
5. The rock moves because it is a big turtle .

C. Rewrite the second sentence in each pair of sentences. Use he, she, it or they for the words in colour.

1. Amrita goes to the garden .Amrita waters the plants .

\*She waters the plants.

2.Where is the book ? The book is on the table.

\*It is on the table .

3. Amal goes to the shop . Amal buys a pen.

\*He buys a pen.

4. My parents are not at home. My parents are in the park.

\*They are in the park.

5. Look at the elephant! The elephant has a tiny tail .

\*It has a tiny tail .

6. Simi likes to play in the park . Simi goes to the park every day .

**\*She goes to the park every day.**

**D. Complete these sentences with the correct words from the box.**

He is	She is	It is	They are
-------	--------	-------	----------

1. Mukul is my friend. He is six years old.
2. Ali and Asif are not at home. They are at school.
3. There is an apple tree in my garden. It is full of apples.
4. Sofia is making a sandwich. She is hungry.
5. This is a butterfly. It is very colourful.
6. Rahul and Sara are coming to Kolkata. They are visiting us.


**E. Look at this picture and read the words given in the box. Then, circle these things in the pictures.**

Sun	cloud	ship	rock	crab	turtle
-----	-------	------	------	------	--------



G. Look at these pictures. Use the correct double letters to complete these words.

ee	ll	oo
----	----	----



F. Look at this picture. Choose the correct words from the box to complete these sentences.



flowers	house
bird	chair

It is 5 o'clock in the evening.

Grandma is sitting outside the 1.house.

She is sitting on a wooden 2.chair.

Manu is giving her 3.flowers.

A 4.bird is singing on the roof.

Note – Do pg.no.4 to 16 in the Gulmohar course book.

# गुरु गोबिंद सिंह पब्लिक स्कूल

## Assignment-9

कक्षा-पहली

विषय-हिंदी

---

प्र.१.दिए गए शब्दों से वाक्य बनाओ।(हिन्दी कॉपी में लिखो)

- तितली-तितली उड़ गई।
- मकड़ी-मकड़ी ने जाल बनाया।
- मछली-सीमा मछली बना।
- पटरी-रेलगाड़ी पटरी पर आई।
- काली-कोयल काली है।
- शीशी-शीशी टूट गई।
- सखी-तितली मीना की सखी है।

प्र.२.सही उत्तर पर (✓)का निशान लगाइए।(पाठ्य पु.पेज न.-32 में करें)

क.कहानी में लड़की का नाम क्या था?

टीना

मीना ☒

ख.एक दिन छोटी बच्ची कहाँ गई थी?

बाग में ☒

पार्क में

ग.छोटी लड़की ने किसे उड़ते हुए देखा?

चिड़िया को

तितली को ☒

प्र.३.पृष्ठ संख्या-33 में प्र.संख्या 2 में करें।

जाली      शीशी      लड़की      तितली

मीना      सखी      नाचती      गाती

प्र.४.तितली का चित्र बनाकर रंग भरे।

अभ्यास पुस्तिका

नोट-दिए गए कार्यों को अभ्यास पुस्तिका में करें।

(पेज न.24 में करें)

प्र.१.‘गाड़ी आई’ कविता की पंक्तियाँ पूरी कीजिए।

काली-काली पटरी पर

धड़धड़ाती गाड़ी आई।

सीटी की आवाज भी आई

खड़ी-खड़ी वह हरषाई।

प्र.२.उचित शब्द पर ई की मात्रा लगाकर कविता पूरी कीजिए।

काली-काली पटरी पर  
धड़धड़ाती गाड़ी आई,  
मीना खड़ी थी खिड़की पर,  
बकरी, पटरी, दिखी बाहर।

प्र.३.ई की मात्रा लगाकर शब्द ठीक कीजिए।

नद-नदी  
दान-दानी  
जाल-जाली  
मकड़-मकड़ी  
माल-माली  
थाल-थाली  
चाब-चाबी  
मछल-मछली  
नाल-नाली

प्र.४.सही शब्द पर गोला लगाइए।

खीड़की	खिड़की	खिड़ाकी
बकरि	बकरी	बकिरी
पटरी	पटरि	पटिरि
सीटी	सिटी	सीटि

प्र.५.पढ़िए,समझिए और लिखिए।

जाली	—	जाल	—	१
बकरी	—	बकर	—	१
उदासी	—	उदास	—	१
लड़की	—	लड़क	—	१
केतली	—	केतल	—	१
मेढकी	—	मेढक	—	१
खड़ी	—	खड़	—	१
दानी	—	दान	—	१

प्र.६.रिक्त स्थान भरिए।

क.मीना बाग में गई।

ख.मीना तितली पकड़ना चाहती थी।

ग.मीना एक शीशी लाई।

घ.मीना ने तितली शीशी में डाल दी।

प्र.७.एक शब्द में उत्तर लिखो।



क.मीना एक दिन कहाँ गई? बाग में

ख.मीना क्या पकड़ना चाहती थी? तितली

ग.तितली मीना की क्या बन गई? सखी

प्र.८.दिए गए शब्दों के विलोम बॉक्स में से छाँटकर लिखिए।

[उदास, पीछे, रात, एक, जाना, पिघलना]

•दिन-रात

•खुश-उदास

•आना-जाना

•आगे-पीछे

•अनेक-एक

•जमना-पिघलना

### व्याकरण

प्र.१.पशु-पक्षियों एवं दी गई वस्तुओं की आवाजें लिखो।

कुत्ता- भौं-भौं

बकरी-मैं-मैं

बिल्ली-म्याऊँ-म्याऊँ

मुर्गा-कुकडु कूँ

गाय-बाँ-बाँ

तोता-टैं-टैं

कौआ-काँव-काँव

कबूतर-गुटर-गूँ

घंटी-टन-टन

बादल-गड़-गड़

घड़ी-टिक-टिक

पानी-टप-टप

पायल-छम-छम

दरवाजा-खट-खट

## पाठ-6 आओ सीखे शब्द बनाना

प्र.२.बोल-बोलकर याद करो।

वर्णों या अक्षरों को आपस में जोड़ने से जो बनता है, वह शब्द कहलाता है।

जैसे-आग,ऊन

प्र.३.वर्णों को जोड़कर लिखे।(व्याकरण पेज न.19 में करें)

•श+ह+र=शहर

•म+ट+र=मटर

•ग+र+म=गरम


•न+र+म=नरम

•क+ल+म=कलम

प्र.४.चित्र के नाम के वर्णों को अलग-अलग लिखो।(व्याकरण पृष्ठ संख्या-22 में करें)

• क+म+ल      • श+र+ब+त      • म+ट+र

प्र.५.चित्र देखकर शब्द सीढ़ी बनाओ।(पृष्ठ संख्या 22 में करें)



समाप्त

## Special Assignment - 9

Class: I






Subject: Maths

### Lesson 3: Subtraction

#### SUBTRACTION

##### ❖ Properties :

- Subtraction means to take away from a group or number of things.
- We use (–) symbol to represent subtraction.
- ‘Take away’ and ‘minus’ both are used for subtraction.

Example: Jai has three pencils    Rinky took away 1 pencil so he was left with   pencils.  $3 - 1 = 2$ ,

- When 0 is subtracted from a number we get the same number. For example.  
 $6 - 0 = 6$ ,  $5 - 0 = 5$ .
- When 1 is subtracted from a number we get the number just before the given number. E.g.  $3 - 1 = 2$ ,  $8 - 1 = 7$ .
- When we subtract a number from itself the result is always 0.  
For example:  $8 - 8 = 0$ ,  $2 - 2 = 0$ .

1. Cross the number of stars taken away, also write the difference.

a)   $5 - 2 = 3$

b)   $8 - 3 = 5$

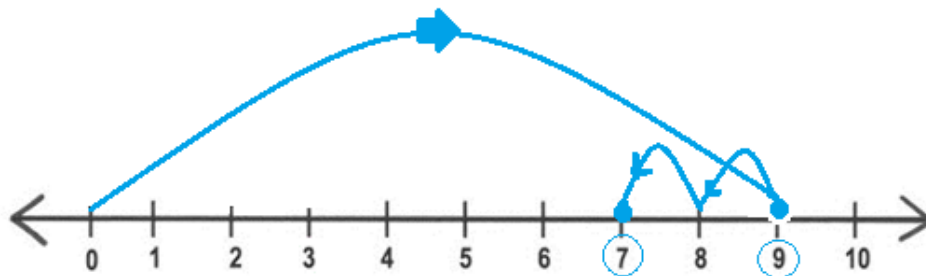
c)   $4 - 2 = 2$

d)   $7 - 1 = 6$

e)   $3 - 3 = 0$

❖ Subtraction by counting backwards on a number line.

- Draw a number line.
- Mark both the given numbers on the same number line each starting from zero (0).
- For example, we have  $9 - 2 = ?$  given. So, now jump on the number 9 starting from zero.
- Now move 2 steps backwards. You will reach number 7. So  $9 - 2 = '7'$ .



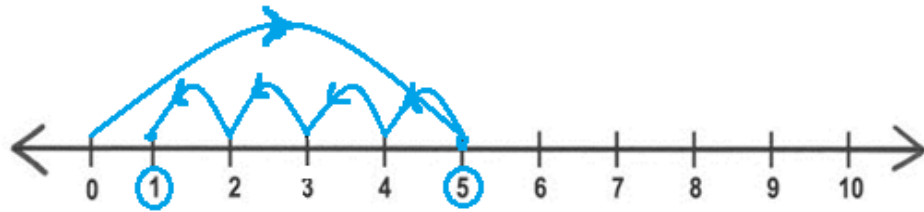
NOTE: Do not forget to put arrow sign.

While moving forward use (>) right moving side arrow.

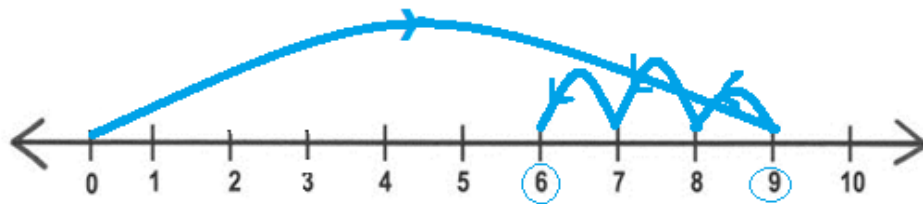
While moving backward use (<) left moving side arrow.

2. Subtract the following on number line.

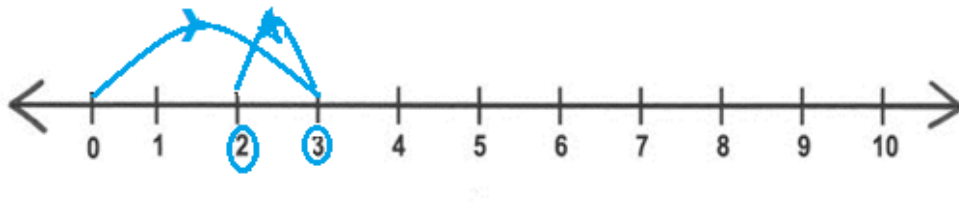
a)  $5 - 4 =$



b)  $9 - 3 =$



c)  $3 - 1 =$



3. Fill in the boxes.

i.  $8 - 1 =$

ii.  $4 - 0 =$

iii.  $2 - 2 =$

iv.  $3 - 1 =$

v.  $8 - 7 =$

vi.  $5 - 5 =$

4. Do the given Word problems.(Page no. 48)

Word problems

1.  butterflies are sitting on the flower.

of them fly away.

So,  butterflies are left.

$$5 - 2 = 3$$



2. There are  bulbs.



of them got fused. Now there are  bulbs left.

$$9 - 3 = 6$$

3. Maya had  ladoos to distribute.

a. She gave none.

$$8 - 0 = 8$$

So, she has  ladoos with her.

b. She gave all  ladoos to her friends.

So, she has  ladoos left with her.

$$8 - 8 = 0$$



4. Raj had 5 pencils.












He gave  to Rahul.

So, Raj has  pencils now.

$$5 - 1 = 4$$



5. Do the following in your Maths notebook.

		WORKING OUT
1)	There are 4  . 3  swim away. How many are left? <u>1</u>	$4 - 3 = 1$
2)	I have 6  . I eat 2  . How many do I have left? <u>4</u>	$6 - 2 = 4$
3)	Sally has 5  . Frazer has 2  . How many more  does Sally have? <u>3</u>	$5 - 2 = 3$
4)	There are 8  . 4  fly away. How many are left? <u>4</u>	$8 - 4 = 4$
5)	Captain has 7  . He gives 3  away. What is 7 minus 3? <u>4</u>	$7 - 3 = 4$

- NOTE: Do the following questions in your maths textbook neatly.
  - Page no. 40, 41, 42, 45, 46, 49 and 50.



## SPECIAL ASSIGNMENT (9)-2020-21

CLASS- 1

SUBJECT- EVS






### CHAPTER 4: TAKING CARE OF MY BODY

DATE – 15/06/2020

Note: Do the following work in the EVS notebook and learn.

**We need to take care of our body, so that it remains healthy. Only a healthy body can have a healthy mind.**

#### **Things to remember:**

-  We should take bath every day.
-  We should go to bed early at night and wake up early in the morning.
-  We should drink plenty of water.
-  We should brush our teeth twice a day.
-  We should wear neat and clean clothes.

#### **I. Fill in the blanks:**

1. We should wear clean clothes.
2. We should drink plenty of water.
3. We should eat food that keeps us healthy and helps us grow strong.
4. We should brush our teeth twice a day.
5. We should go to bed early at night and wake up early in the morning.

#### **II. Name the things shown in the following pictures:**



Ans. Toothbrush.

2.



Ans. Towel.

3.



Ans. Comb.

4.



Ans. Soap.

### III. Write 'T' for True and 'F' for False for the given statements:

- |                                    |   |
|------------------------------------|---|
| 1. We must wear dirty clothes.     | F |
| 2. Healthy food makes us strong.   | T |
| 3. We must drink clean water.      | T |
| 4. Exercise makes us sick.         | F |
| 5. We need to take rest every day. | T |

### IV. Answer the following questions:

1. What do we use to trim our nails?

Ans. We use a nail cutter to trim our nails.

2. What should we do before and after every meal?

Ans. We should wash our hands before and after every meal.

3. Why do we exercise?

Ans. We exercise to stay strong and fit.

4. List two activities that you do daily?

Ans. Eating, Studying

**V. Put (✓) for the right statements & (×) for the wrong statements:**

- |  |   |
|--|---|
| 1. Always rub your eyes.                         | × |
| 2. Brush your teeth twice a day.                 | ✓ |
| 3. Watch television from a safe distance.        | ✓ |
| 4. Do not put anything inside your nose or ears. | ✓ |
| 5. Never wear neat and clean clothes.            | × |

\*\*\*\*\*

## **SUBJECT – M.SC**

### **LESSON – 2**

#### **GIFTS OF GOD**

**1) What are the things God has given to us ?**

**Ans ) The God has given us the bright sun , the moon , the twinkling stars , lovely birds and animals and all the gifts of nature .**

**2) Whom should we thank for all the things around us ?**

**Ans ) We should thankful to the Almighty God for all the things around us**

**3) Who has made the sun , moon and stars ?**

**Ans) The Almighty God has made the sun , moon and stars .**

**4) Mention the names of the things which make our world beautiful .**

**→ The sun , moon and stars .**

**→ The lovely birds and animals .**

**→ The colourful butterflies etc .**

## **REVISION**

**CLASS- 1**

**SUBJECT- G.K**

**DATE- 13.06.2020**

---

### **UNIT- 1      Beautiful Nature**

**I)      Learn the following.**

**Q.1) Where is the largest tree in India?**

**Ans. The largest tree in India is located in Kolkata Botanical garden.**

**Q.2) Which is the most popular breed of dog?**

**Ans. The most popular breed of dog is Labrador.**

**Q.3) What are the different parts of a plant?**

**Ans. The different parts of a plant are root, stem, flower, leaf, branch and fruit.**

**Q.4) Name two pet animals.**

**Ans. Dog and cat are two pet animals.**

**Q.5) Name two wild animals.**

**Ans. Lion and tiger are two wild animals.**

**Q.6) Name any two things that we get from plants.**

**Ans. The two things that we get from plants are fruits and vegetables.**

**Q.7) What is the second largest cat in the world?**

**Ans. Lion is the second largest cat in the world.**

**Q.8) Which is the national flower of India?**

**Ans. Lotus is the national flower of India.**

**Q.9) Which animal has unique pattern like human fingerprints?**

**Ans. Zebra has unique pattern like human fingerprints.**

**Q.10) Where does a rabbit live?**

**Ans. A rabbit lives in burrow.**

# SPECIAL ASSIGNMENT - 09

CLASS- I

SUBJECT- COMPUTER

**Note-** Revise lesson-1, My Computer

## LESSON-1 MY COMPUTER

### **A. Answer the following questions.**

1. What is a computer?

Ans. Computer is an electronic machine. It works on electricity. It helps us to work faster and more accurately.

2. Write a few uses of the computer?

Ans. Computers store information and perform numerical calculations much faster than humans. It also helps us to play games, listen to music and use the Internet.

3. What is a calculator?

Ans. A calculator needs a battery to work. It helps us to do arithmetic calculations like additions, subtraction, multiplication and division.

4. Name some machines which need fuel to work.

Ans. Machines which require fuel to work are automobiles such as bikes, scooter, cars, trucks, bus, airplanes, ships etc.

### **B. Fill in the blanks to make meaningful words.**

1. Ele c t r o nic

2. Cal c u l a tor

3. Te l e v i sion

4. Ju i c er

**C. Write True or False for the following statement.**

1. A computer can work without paper. True
2. We can use computer to watch movies. True
3. We feed the computer to make it grow up. False
4. Computers store food. False

**D. Match the following.**

Machine	Energy source
1. Calculator	(i) Fuel <u>(5)</u>
2. Computer	(ii) Battery/cell <u>(1)</u>
3. Solar cooker	(iii) Electricity <u>(2)</u>
4. Potato peeler	(iv) Sunlight <u>(3)</u>
5. Car	(v) Human strength <u>(4)</u>



## Special Assignment 2020-21

Subject –Drawing

Class – One

Name of the book – Art for generation-1

Fill colour in book

Page no. - 3 colour and shapes

Page no. - 4 juggler