

Do the given assignment in your English note book.

Lesson - 6 The Man Cub

Words to learn

- | | |
|------------|--------------|
| 1. jungle | 6. growled |
| 2. cubs | 7. agreed |
| 3. crawled | 8. lying |
| 4. grabbed | 9. stepped |
| 5. leaped | 10. suddenly |

Word meaning

- | | |
|----------------------|---------------------------------------------|
| 1. Cubs | = baby animals |
| 2. mouth of the cave | = the opening from where you enter the cave |
| 3. crawled | = moved on his hands and knees |
| 4. grabbed | = held it strongly |
| 5. after | = trying to find or catch someone |
| 6. forward | = to the front |
| 7. growled | = made a low sound to show anger |
| 8. agreed with | = said yes |

Make sentences

- | | |
|------------|-------------------------------------------------|
| 1. cubs | - The hunter saw two lion's cubs in the jungle. |
| 2. grabbed | - The dog grabbed the bone and ran away. |
| 3. leaped | - The goats leaped over the fence. |
| 4. growled | - The street dogs growled at the strangers. |
| 5. crawled | - The wounded soldier crawled into the cave. |

Answer these questions.

- Q.1. Why was Shere Khan the tiger angry?
Ans: Shere Khan the tiger was angry because Mother Wolf and Father Wolf denied to give him the man's cub which was inside their cave.
- Q.2. According to Shere Khan, what happened to Mowgli's parents?
Ans: According to Shere Khan, Mowgli's parents had run away.
- Q.3. Why did Father Wolf and Mother Wolf decide to keep Mowgli?
Ans: Father Wolf and Mother Wolf decided to keep Mowgli because they wanted to save him from Shere Khan.
- Q.4. **"The cub must be shown to the pack."**

a) *Who says this line? Who is the cub here?*

Ans: *Father Wolf says this line. Mowgli is the cub here.*

b) *What is the pack?*

Ans: *The group of wolves that live together like a family is the pack.*

c) *Why must Mowgli be shown to the pack?*

Ans: *Mowgli must be shown to the pack because only they can tell if he can live with them or not.*

Learn and write the given composition in your English note book.

Independence Day

- 1. We celebrate Independence Day on 15th August.*
- 2. On this day, India got freedom from the British rule in 1947.*
- 3. It is our national festival.*
- 4. The Prime Minister unfurls the National Flag at the Red Fort.*
- 5. We also remember our freedom fighters.*
- 6. People celebrate this day with great enthusiasm.*

X

X

X

विशेष कार्य (17)

कक्षा: 2

विषय— हिन्दी

दिनांक : 24.8.20

पाठ: 8 नई दिवाली

प्र01) सही शब्द चुनकर वाक्य पूरे करो— (पाठ्यपुस्तक पेज न0 49 में करें प्र0 5)

से का के को में

क) दिवाली **का** त्योहार बच्चों को बहुत पसंद है।

ख) बच्चे दिवाली **के** दिन पटाखे जलाते हैं।

ग) सभी इस दिन अपने घरों **को** दीपों से सजाते हैं।

घ) वह खंभे **से** जा टकराया।

ड.) नमन के पापा अस्पताल **में** भर्ती थे।

कला—कौशल

प्र01) आपको कौन —सा त्योहार पसंद है और क्यों ? पाँच वाक्य लिखिए— (पाठ्यपुस्तक पेज न0 49 में करें)

- 1) मुझे दिवाली का त्योहार बहुत पसंद है।
- 2) इस दिन हम नए कपड़े पहनते हैं।
- 3) हम दीप जलाते हैं तथा मिठाइयाँ खाते हैं।
- 4) सभी तरह —तरह के पटाखे जलाते हैं।
- 5) चारों ओर दीपों की जगमगाहट बहुत अच्छी लगती है।

प्र02) नीचे दिए गए स्वादिष्ट व्यंजनों को उनके मुख्य त्योहार से रेखा खींचकर मिलाओ—

(पाठ्यपुस्तक पेज न0 50 में करें)



प्र03) दिवाली आप किस तरह से मनाते हो? सही वाक्य पर ✓ का निशान लगाओ-

क) एक दूसरे को मिठाई और बधाई देकर। (✓)

ख) अधिक से अधिक पटाखे छोड़कर। ()

ग) आप पटाखे नहीं छोड़ते हैं क्योंकि आप जानते हैं कि इससे वातावरण की हवा ज़हरीली हो जाती है। (✓)

घ) घर को सजाकर और रंग - बिरंगी रोशनी लगाकर। (✓)

प्र04) जो शब्द अलग वर्ग का है, उस पर गोला ○ लगाओ-

क) भालू चीता बंदर (मगर)

ख) सेब केला (पालक) नाशपाती

ग) राम मोहन (सीता) रवि

घ) होली ईद (बालदिवस) दीवाली

अभ्यास पुस्तिका (पेज न0 17 ,18 में करें।)

प्र05) नीचे दिए गए उदाहरण देखकर दो-दो शब्द लिखो—

प्र	—	प्रहार	प्रबंध	प्रणाम
दुर्	—	दुर्दशा	दुर्जन	दुर्गम
वि	—	विदेश	विशाल	विचार
उप	—	उपकार	उपवास	उपवन

प्र06) नीचे लिखे शब्द पढ़कर खाली स्थान भरो—

(प्रदूषित , खंभे , आँसू , छत , छुट्टियाँ)

- क) नमन **छत** पर जाकर छिप गया ।
ख) वातावरण को **प्रदूषित** होने से बचाएँगे ।
ग) आँखों में **आँसू** आ गए ।
घ) स्कूल की **छुट्टियाँ** शुरू हो गई थीं ।
ड.) स्कूटर **खंभे** से टकरा गया ।

प्र07) दिवाली ' त्योहार ' पर पाँच पंक्तियाँ लिखो—(पेज न0 18 में करें।)


- 1) दिवाली का त्योहार हिंदुओं के प्रमुख त्योहारों में से एक है ।
- 2) इसे दीपों का त्योहार भी कहा जाता है ।
- 3) यह त्योहार कार्तिक मास में आता है ।
- 4) इस दिन भगवान श्रीराम 14 साल का वनवास काटकर अयोध्या लौटे थे ।
- 5) इस दिन दीप जलाए जाते हैं, लोग पटाखे छोड़ते हैं ।

व्याकरण (पेज न0 44 ,45 में करें ।)

क) सही शब्द चुनकर खाली स्थान भरो ।

- 1) अम्मा ने **एक दर्जन** केले खरीदे। (एक मीटर , एक दर्जन)
- 2) तोते का रंग **हरा** है। (लाल , हरा)
- 3) आज मैंने **मीठी** खीर खाई। (नमकीन , मीठी)
- 4) गेंद का आकार **गोल** होता है। (चौकोर , गोल)

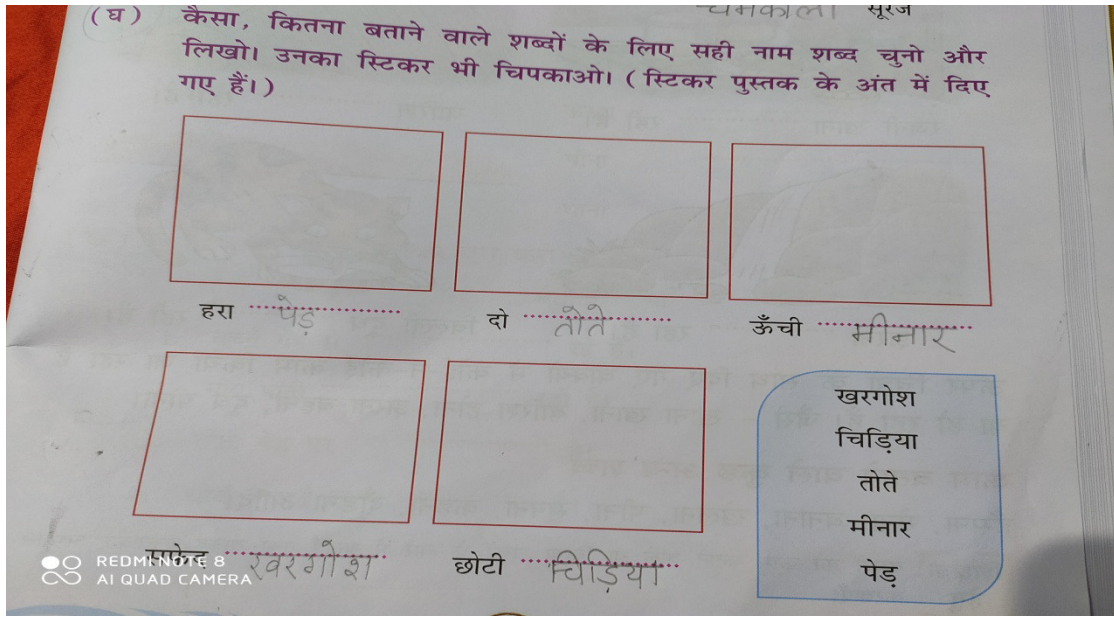
ख) चित्र के लिए सही शब्द चुनकर गोला बनाओ।



ग) कैसा या कितना बताने वाले शब्द लिखो।

लाल	टमाटर	खट्टा	नींबू
काले	बादल	गरम	चाय
हरी	घास	ठंडी	शरबत
काली	कोयल	चमकीला	सूरज

घ) कैसा ,कितना बताने वाले शब्दों के लिए सही नाम शब्द चुनो और लिखो । उनका स्टिकर भी चिपकाओ ।(स्टिकर पुस्तक के अंत में दिए गए हैं)



प्रश्न) 15 अगस्त (स्वतंत्रता दिवस) पर निबंध लिखें।

- 1) भारत में 15 अगस्त बड़े ही धूम – धाम से मनाया जाता है।
- 2) 15 अगस्त 1947 को हमारा देश अंग्रेजों की गुलामी से आज़ाद हुआ था।
- 3) इस दिन राजधानी दिल्ली में हमारे प्रधानमंत्री लाल किले पर राष्ट्रीय ध्वज फहराते हैं।
- 4) इस दिन सभी विद्यालयों, सरकारी कार्यालयों पर राष्ट्रीय ध्वज फहराया जाता है।
- 5) राष्ट्रगीत गाया जाता है तथा शहीदों को याद किया जाता है।
- 6) यह हमारा राष्ट्रीय पर्व है।

ASSIGNMENT NO.17

STANDARD-II

SUB – MATHS

DATE:24.08.20

TOPIC – LESSON 5 (BASIC GEOMETRY)

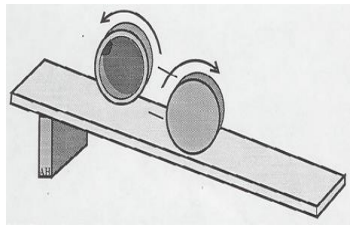
* **ROLL OR SLIDE :-**

* Solids which have flat surfaces can slide down a sloping surface.

Eg. Cubes and cuboids



* Solids which have curved surfaces can roll down a sloping surface. Eg. sphere



* **DIFFERENT TYPES OF LINES:-**

* There are mainly two types of lines. They are as follows-

a) Straight line



b) Curved line



* There are three kinds of straight lines which are as follows-

a) Horizontal line (sleeping line)



b) Vertical line (standing line)



c) Oblique line (slanting line)



1. Find the number of curved , horizontal , vertical and slanting lines in the given figures.

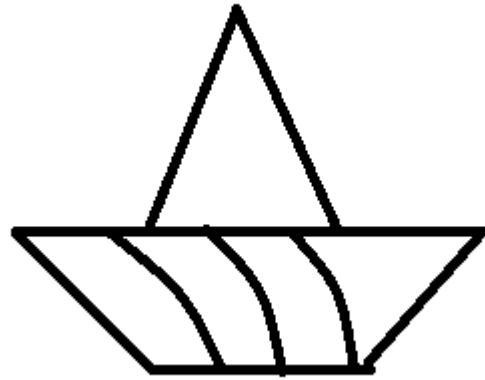


1.

Horizontal lines = 2

Vertical lines = 3

Slanting lines = 4



2.

Horizontal lines = 2

Slanting lines = 4

Curved lines = 3

2. Answer the following questions in Yes or No.

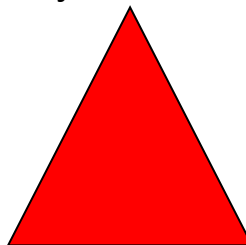

1. Does your eraser roll down a slope? **No**
2. Does your pencil slide down a slope? **No**
3. Does a chalk roll down a slope? **Yes**
4. Does a cricket ball roll down a slope? **Yes**

3. Trace the shapes with the base of these objects. Name the plane shapes you get.



1.

Sandwich



Triangle




2.

Book



Rectangle


3.



Bottle

Circle

4.



Kite

Square

4. Fill in the blanks.

- a) A square and a rectangle both have 4 sides and 4 corners.
- b) A circle and a sphere have 0 corners and 0 sides.
- c) The surface of a solid is called its face.
- d) A cube has 6 faces , 8 vertices and 12 edges.

5. Tick (✓) the correct answer.

1) A square has ____ vertices.

- a) 1 ☐ b) 2 ☐ c) 3 ☐ d) 4 ☒

2) A book reminds us of a _____.

- a) cube ☐ b) cuboid ☒ c) cone ☐ d) none of these ☐

3) A cylinder has _____ vertices.

- a) 0 ☒ b) 1 ☐ c) 2 ☐ d) 4 ☐

6 .Learn and write the table of 10.

10	X	1	=	10
10	X	2	=	20
10	X	3	=	30
10	X	4	=	40
10	X	5	=	50
10	X	6	=	60
10	X	7	=	70
10	X	8	=	80
10	X	9	=	90
10	X	10	=	100

NOTE:- Complete upto page no. 78 in your Maths textbook.

SPECIAL ASSIGNMENT – 17

CLASS- II

SUBJECT- EVS

Note- The following Assignment is to be done in EVS notebook.

LESSON-10 Our Neighbourhood

Read the lesson twice.

A) Write missing letters.

1. Neighbours
2. Market
3. Bank
4. Post office
5. Police station
6. Brave
7. Hospital
8. Envelopes
9. Money
10. Chemist

B) Give two example of each.

1. Helpers-
 - Doctor, Postman.
2. Things we can buy from a post office.
 - Envelopes, stamps.
3. Things we can see at fire station.

➤ Water pipes, ladder.

4. Things we can deposit in a bank.

➤ Money ,gold.

5. Things we can buy from market.

➤ Fruits, vegetables.

C) Answer the following questions.

Q1. What is a neighbourhood?

Ans. Neighbourhood is the area around our house.

Q2. Name the important services that are available in the neighbourhood.

Ans. The important services that are available in the neighbourhood are market, bank, post office, fire station, hospital, school and chemist shop.

Q3. What is the role of doctors and nurses in hospitals?

Ans. Doctors examine patients and give them medicines. Nurses take care of the patients.

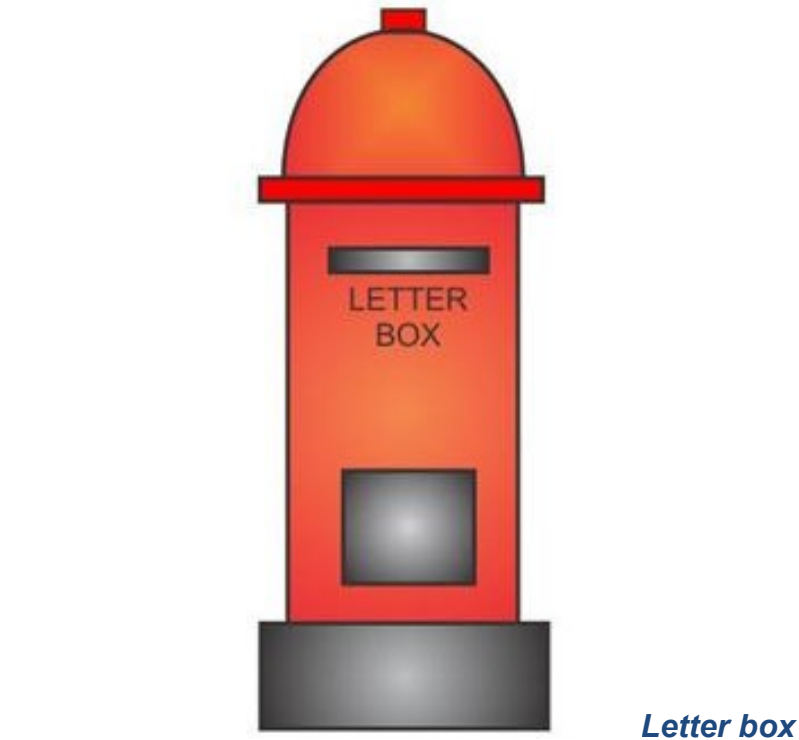
Q4. From where can we buy stamps, envelopes and postcards?

Ans. We can buy stamps, envelopes and postcards from a post office.

Q5. Why do children go to school?

Ans. Children go to school to learn how to read and write. They also learn good manners and good habits in school.

D) Draw and colour a letter box.



Note: The following Assignment is to be done in EVS book.

A. Fill in the blanks.

Law order bank neighbours post office hospital

1. Neighbours are the people who live near our house.
2. Patients are treated in the hospital.
3. We can keep our money safe in a bank.
4. We can post our letters at a post office.
5. The police maintain law and order.

B. Write true or false.

1. People who are ill go to post office. False

2. Firemen risk their lives to save us from fire. True
3. We buy grocery from a chemist shop. False
4. Children learn good manners in schools. True

C. Match the following.

Sr. no.	A	Sr. no.	B	Ans.
1.	Bank	A.	Send letters	<u>4.</u>
2.	Police station	B.	Sell medicines	<u>3.</u>
3.	Chemist shop	C.	Deposit money and gold	<u>1.</u>
4.	Post office	D.	Maintain law and order	<u>2.</u>

D. Tick right word.

1. Here are the people who protect us from thieves.

Police station ✓ / Clinic

2. We can buy medicines from here.

Chemist shop ✓ / Police station

3. We can buy stamps from here.

School / Post office ✓

4. This keeps our money safe.

Hospital / Bank ✓

Class- 2.
Moral Science.
Date:24.08.2020

Assignment-14 (Session-2019-20)
Revision Assignment

A. Question and Answer:

1. Who are our guides?

Ans: Our parents and teachers are our guides.

2. Who peeped through the window?

Ans: The kid peeped through the window.

3. What do you understand by being punctual?

Ans: Being punctual means always being on time for all
occasions.

4. What is obedience?

Ans: Obedience is the willingness to obey.

5. Who was Aaruni?

Ans: Aaruni was an obedient student.

6. What did Ekalavya Eklavya give to his guru Dronacharya?

Ans: Eklavya cut off his thumb and gave it to his guru.
Dronacharya.

B. True or False

1. Obedience is a great virtue . True

2. Person who does not work hard becomes a rich person .

False

3. Time is not important in our life. False

4. Aaruni was an obedient student. True

5. We should disobey our elders. False

6 . Time is not important in our life. False

7. A punctual person is always successful. True

{Note: Learn and revise the answers of the given assignment.}

Assignment No.17

Std 2. Session 2020-21

Subject:-Computer(oral)

Date:-24.08.20

Chapter 4.Using MS Windows

1. Fill in the blanks
 - a) Desktop is the initial screen of MS Windows.
 - b) Icons represent certain programs.
 - c) Start button is located at the bottom left corner of the screen.
 - d) Clicking on Start button opens a pop-up menu.
 - e) The option accessories can be accessed by clicking on the programs option on the pop-up menu.
2. Tick (✓)for correct and cross (x)for incorrect statements.
 - a) MS Windows is a type of computer. X
 - b) Desktop is the name of a special monitor. X
 - c) To explore Windows you must click on My computer icon. ✓
 - d) 'Turn off computer' option can be accessed by clicking on the Start button.✓
 - e) Program window can be opened by clicking on Taskbar buttons.✓
3. Choose(✓) the best option from those given in the following.
 - i) The screen obtained by switching ON the computer is called the
 - a) Pop-up menu
 - b) Desktop ✓
 - c) Icon
 - d) None of these
 - ii) Some pictures/symbols representing a program are called
 - a) Icons ✓
 - b) Buttons
 - c)Submenus
 - d) None of these
 - iii) MS Windows is a/ an
 - a) Paint software
 - b) Operating system ✓
 - c) Program
 - d) None of these
 - iv) You can select any option in Windows by clicking the
 - a) left button of mouse, twice b)right button of mouse ,once

c)left button of mouse,once ✓

d) None of these

v) Program window can be opened by clicking on

a)Taskbar

b)Icons ✓

c)Start button

d) None of these

REVISION (SOLVED ASSIGNMENT - 14)

CLASS- 2

SUBJECT- G.K

DATE- 24.08.2020

UNIT- 2 Sports and entertainment

Learn the following.

Q.1) Name any two sports equipments.

Ans. Bat and Shuttle.

Q.2) Name any two parts of Carrom Board.

Ans. Net holes and Arrows.

Q.3) Who invented volleyball in 1895?

Ans. Volleyball was invented by Williams G. Morgan in 1895.

Q.4) What is the other name of chess in local language?

Ans. Shatranj.

Q.5) Name any two games.

Ans. Billiards and snooker

Q.6) What are the two shapes of Carrom Board?

Ans. The two shapes of Carrom Board are Square and Hexagon.

Q.7) Which is the most popular folk dance of Gujarat?

Ans. Garba is the most popular folk dance of Gujarat.

Q.8) Which state dance is Ghoomar?

Ans. Rajasthan

Q.9) Which sports do these sportsperson play?

- a) P V Sindhu- Badminton**
- b) Michael Phelps - Swimming**
- c) Novak Djokovic – Lawn tennis**
- d) Usain Bolt – Athletics**
- e) Michael Jordan – Basketball**
- f) Cristiano Ronaldo - Football**

Special Assignment -2020-21

Sub – Drawing Class –Two Date - 24.08.20

Name of the book – Art for generation -2

Fill colour in book

Page no.

Topic

15

Porcupine