

CLASS: IX

Date: 29 – 04 – 2020

ASSIGNMENT

Multiple choice questions:

SUBJECT: IT

1. Understanding _____ different parts of speech forms the base of leaning grammar.
(A) Five
(B) Eight
(C) Six
(D) Seven
2. A _____ way be defined as the name of a person place or thing .
(A) Verb
(B) Noun
(C) Pronoun
(D) Adverb
3. Proper nouns always begin with _____ letters .
(A) Running
(B) Capital
(C) Small
(D) Numerical
4. While talking to friends you do not pay attention to the skills of _____ Communication.
(A) Written
(B) Oral
(C) audio
(D) visual
5. 'A' and 'an' are the _____ articles .
(A) Definite
(B) Indefinite
(C) Particular
(D) Specified

SUBJECT: ENGLISH

1. Butterflies are abundant _____ the Central African Republic.
 - a. in
 - b. from
 - c. for
 - d. into

2. Many butterflies are brilliantly coloured and small _____ some are as big as saucers.
 - a. if
 - b. therefore
 - c. so
 - d. while

3. It _____ home to nearly 600 identified species.
 - a. has
 - b. is
 - c. was
 - d. are

4. Farmer _____ solace in collecting butterfly wings from his fields.
 - a. find
 - b. to find
 - c. finding
 - d. finds

5. My favourite hobby, since my childhood, is _____ butterflies.
 - a. catch
 - b. caught
 - c. catching
 - d. has been catching

SUBJECT: MATHS

1. If $x + 1$ is a factor of the polynomial $2x^2 + kx$, then the value of k is:

- a) -3
- b) 4
- c) 2
- d) -2

2. The value of $99^2 - 98^2$ is:

- a) 1
- b) 197
- c) 187
- d) 207

3. The factorization of $6x^2 + 11x + 3$ is:

- a) $(3x + 1)(2x + 3)$
- b) $(x + 1)(2x + 3)$
- c) $(x + 3)(2x + 1)$
- d) $(3x + 3)(x + 1)$

4. If $3 + 5 - 8 = 0$, then the value of $(3)^3 + (5)^3 - (8)^3$ is

- (a) 260
- (b) -360
- (c) -160
- (d) 160

5. Find the value of 104×96 (By using Identity) is :

- (a) 9984
- (b) 9469
- (c) 10234
- (d) 11324

SUBJECT: PHYSICS

1. From the given $v - t$ graph, it can be inferred that the object is

- (a) in uniform motion
- (b) at rest
- (c) in non-uniform motion
- (d) moving with uniform acceleration



2. Suppose a boy is enjoying a ride on a merry-go-round which is moving with a constant speed of 20 m/s. It implies that the boy is

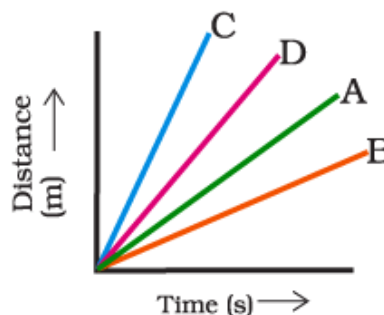
- (a) at rest
- (b) moving with no acceleration
- (c) in accelerated motion
- (d) moving with uniform velocity

3. Area under a $v - t$ graph represents a physical quantity which has the unit

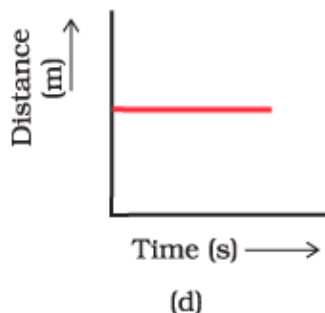
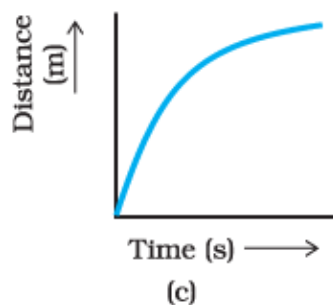
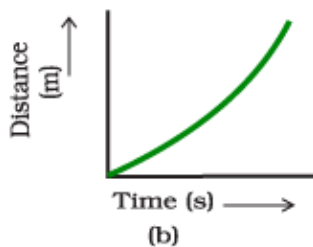
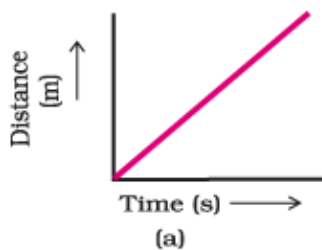
- (a) m^2
- (b) m
- (c) m^3
- (d) $m\ s^{-1}$

4. Four cars A, B, C and D are moving on a levelled road. Their distance versus time graphs is shown in Fig. Choose the correct statement

- (a) Car A is faster than car D.
- (b) Car B is the slowest.
- (c) Car D is faster than car C.
- (d) Car C is the slowest.



5. Which of the following figures, represents uniform motion of a moving object correctly?



SUBJECT: CHEMISTRY

1. Which of the following does not affect rate of evaporation?

- (a) Wind speed
- (b) Surface area
- (c) Temperature
- (d) Insoluble heavy impurities

2. Kinetic energy of molecules is directly proportional to

- (a) Temperature
- (b) Pressure
- (c) Atmospheric pressure
- (d) Both (a) and (b)

3. Which of the following is not endothermic process?

- (a) Fusion
- (b) Vaporization
- (c) Temperature
- (d) Insoluble heavy impurities

4. The colour of vapours formed on sublimation of iodine (solid) is
 - (a) Purple
 - (b) Colourless
 - (c) Yellow
 - (d) Orange
5. Under which of the following conditions we can boil water at room temperature?
 - (a) At low pressure
 - (b) At high pressure
 - (c) At very high pressure
 - (d) At atmospheric pressure

SUBJECT: BIOLOGY

1. Inland fisheries is referred to
 - a) Culturing fish in freshwater
 - b) Trapping and capturing fishes from sea coast
 - c) Deep sea fisheries
 - d) Extraction of oil from fishes
2. Rotation of crops is essential for
 - a) Getting different kinds of crops
 - b) Increasing quality of minerals
 - c) Increasing quality of proteins
 - d) Increasing fertility of soil
3. The element which is required in largest quantity by plants is
 - a) Sulphur
 - b) Calcium
 - c) Phosphorus
 - d) Nitrogen
4. Growing two or more crops in definite row pattern is
 - a) Mixed farming
 - b) Mixed cropping
 - c) Intercropping
 - d) Crop rotation

5. Living organisms are used in
- a) Biofertilizers
 - b) Organic manure
 - c) Pesticides
 - d) Chemical fertilizers

SUBJECT: CIVICS

- 1) Which reason is accountable for the death of nearly 3 crore people in China's famine of 1958-1961?
- a) Absence of democracy
 - b) Presence of democracy
 - c) Weak economic setup
 - d) Government's negligence
- 2) With what motive did general Parvez Musharraf issue a 'legal framework order' in August 2002?
- a) To enhance dignity of citizens
 - b) To empower himself
 - c) To empower the supporters
 - d) To amend the Constitution of Pakistan
- 3) General Parvez Musharraf issued a 'Legal Framework Order' in
- a) 2002
 - b) 2003
 - c) 2004
 - d) 2005
- 4) What is peculiar with ZANU-PF?
- a) It has never won any election
 - b) It has always won elections
 - c) It is a one man party
 - d) It is the biggest political party in the world
- 5) In a democracy the final decision making power must rest with whom?
- a) Those elected by the people
 - b) Those who are in military
 - c) The head of the state
 - d) The king

SUBJECT: GEOGRAPHY

1. What influenced the making of dome and minarets which can be seen in different parts of India?
 - A. East Asia
 - B. West Asia
 - C. North Asia
 - D. South Asia
2. Which one of these is southern most part of Indian mainland?
 - A. Indira Point
 - B. Pitti Island
 - C. Kanyakumari
 - D. Little Nicobar
3. Who is the neighbour of India in the west?
 - A. Pakistan
 - B. Sri Lanka
 - C. Russia
 - D. Bhutan
4. Which is the capital of Lakshadweep?
 - A. Daman
 - B. Kavaratti
 - C. Leh
 - D. Yanam
5. Which state of India experiences sun rise first?
 - A. Arunachal Pradesh
 - B. Sikkim
 - C. Nagaland
 - D. Mizoram

ASSIGNMENT...3 CLASS...9 SUBJECT...HINDI...DATE...29.04.2020

MCQ (वस्तुनिष्ठ प्रश्न)

Q 1. ल्हासा की ओर पाठ किस विधा में लिखा गया है?

- a) कहानी
- b) नाटक
- c) यात्रा वृत्तान्त
- d) रेखाचित्र

Q 2. लेखक लड़कोर के मार्ग में अपने साथियों से किस कारण पिछड़ गया?

- a) लेखक का घोड़ा धीरे-धीरे चल रहा था
- b) घोड़े के सुस्त पड़ने एवं अकेले होने के कारण रास्ता भूल गया
- c) वह गलत रास्ते पर डेढ़-दो मील चलता गया और फिर वापस आकर सही रास्ते पर गया
- d) उपर्युक्त सभी

Q 3. 'मैं अब पुस्तकों के भीतर था' नीचे दिया गया कथन किसका है?

- a) सुमति का
- b) लेखक का
- c) भिक्षु नम्से का
- d) जागीरदार का

Q 4. लेखक ने अपनी प्रथम तिब्बत यात्रा किस वेशभूषा में की?

- a) डाकू के
- b) पुलिस के
- c) भिक्षु के
- d) किसान के

Q 5. सुमति अपने यजमानों को कहां से लाए गंडे बांटते थे?

- a) बोधगया
- b) गया

c) ल्हासा

d) शेकर बिहार

Date:-29.04.20

Subject:- Sanskrit

Class-9

उचित संख्यावाची शब्दैः रिक्त स्थानानि पूरयत -

प्रश्न:-1

अरिजन्त स्यूते — पुरत्तके स्तः।

क. द्वौ

ग. द्वयः

ख. द्वे

घ. द्वि

प्रश्न:-2

मालाकारः उद्याने — पुष्पाणि पश्यति।

क. त्रीणि

ग. त्रयः

ख. तिस्रः

घ. त्रि

प्रश्न:-3

— महानगरेषु दिल्ली स्व भारतस्य राजधानी।

क. चत्वारि

ग. चतुर्षु

ख. चत्वारः

घ. चतस्रः

प्रश्न:-4

शरीवरे — कमलानि सन्ति।

क. त्रयः

ग. त्रीणि

ख. त्रि

घ. तिस्रः

प्रश्न:-5

तस्य — पुत्राः सन्ति।

क. चतस्रः

ग. चतुर्

ख. चत्वारि

घ. चत्वारः